




Easter Eggs in a Basket (J)


Put Easter eggs with sums greater than 25 in the basket.


$$\begin{array}{r} 21 \\ + 2 \\ \hline \end{array}$$



$$\begin{array}{r} 6 \\ + 25 \\ \hline \end{array}$$



$$\begin{array}{r} 18 \\ + 20 \\ \hline \end{array}$$



$$\begin{array}{r} 5 \\ + 23 \\ \hline \end{array}$$


$$\begin{array}{r} 22 \\ + 25 \\ \hline \end{array}$$



$$\begin{array}{r} 20 \\ + 8 \\ \hline \end{array}$$



$$\begin{array}{r} 12 \\ + 4 \\ \hline \end{array}$$


$$\begin{array}{r} 11 \\ + 11 \\ \hline \end{array}$$



$$\begin{array}{r} 2 \\ + 2 \\ \hline \end{array}$$



$$\begin{array}{r} 7 \\ + 20 \\ \hline \end{array}$$


$$\begin{array}{r} 3 \\ + 2 \\ \hline \end{array}$$



$$\begin{array}{r} 18 \\ + 6 \\ \hline \end{array}$$



$$\begin{array}{r} 10 \\ + 21 \\ \hline \end{array}$$



$$\begin{array}{r} 10 \\ + 11 \\ \hline \end{array}$$


$$\begin{array}{r} 16 \\ + 18 \\ \hline \end{array}$$


$$\begin{array}{r} 6 \\ + 13 \\ \hline \end{array}$$


$$\begin{array}{r} 5 \\ + 7 \\ \hline \end{array}$$


$$\begin{array}{r} 10 \\ + 5 \\ \hline \end{array}$$


$$\begin{array}{r} 15 \\ + 23 \\ \hline \end{array}$$



$$\begin{array}{r} 20 \\ + 11 \\ \hline \end{array}$$





How many Easter eggs go in the basket?


Easter Eggs in a Basket (J) Answers


Put Easter eggs with sums greater than 25 in the basket.



$$\begin{array}{r} 21 \\ + 2 \\ \hline 23 \end{array}$$



$$\begin{array}{r} 6 \\ + 25 \\ \hline 31 \end{array}$$



$$\begin{array}{r} 18 \\ + 20 \\ \hline 38 \end{array}$$



$$\begin{array}{r} 5 \\ + 23 \\ \hline 28 \end{array}$$



$$\begin{array}{r} 22 \\ + 25 \\ \hline 47 \end{array}$$



$$\begin{array}{r} 20 \\ + 8 \\ \hline 28 \end{array}$$



$$\begin{array}{r} 12 \\ + 4 \\ \hline 16 \end{array}$$



$$\begin{array}{r} 11 \\ + 11 \\ \hline 22 \end{array}$$



$$\begin{array}{r} 2 \\ + 2 \\ \hline 4 \end{array}$$



$$\begin{array}{r} 7 \\ + 20 \\ \hline 27 \end{array}$$



$$\begin{array}{r} 3 \\ + 2 \\ \hline 5 \end{array}$$


$$\begin{array}{r} 18 \\ + 6 \\ \hline 24 \end{array}$$



$$\begin{array}{r} 10 \\ + 21 \\ \hline 31 \end{array}$$



$$\begin{array}{r} 10 \\ + 11 \\ \hline 21 \end{array}$$



$$\begin{array}{r} 16 \\ + 18 \\ \hline 34 \end{array}$$


$$\begin{array}{r} 6 \\ + 13 \\ \hline 19 \end{array}$$


$$\begin{array}{r} 5 \\ + 7 \\ \hline 12 \end{array}$$


$$\begin{array}{r} 10 \\ + 5 \\ \hline 15 \end{array}$$


$$\begin{array}{r} 15 \\ + 23 \\ \hline 38 \end{array}$$


$$\begin{array}{r} 20 \\ + 11 \\ \hline 31 \end{array}$$



How many Easter eggs go in the basket?

10