
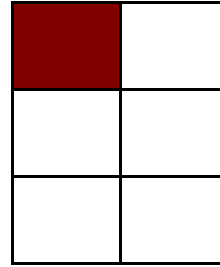


Modeling Sixths (A)


Instructions: Write the correct numerator.



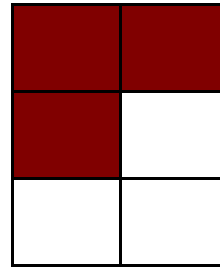
$$\frac{2}{6}$$



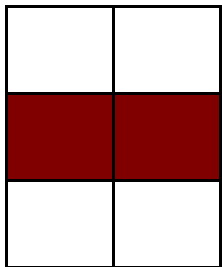
$$\frac{\quad}{6}$$



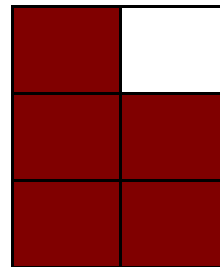
$$\frac{\quad}{6}$$




$$\frac{\quad}{6}$$




$$\frac{\quad}{6}$$



$$\frac{\quad}{6}$$




$$\frac{\quad}{6}$$



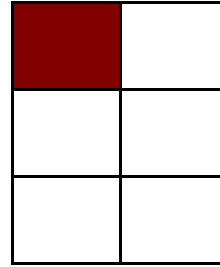
$$\frac{\quad}{6}$$

Modeling Sixths (A) Answers


Instructions: Write the correct numerator.



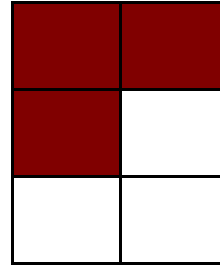
$$\frac{2}{6}$$



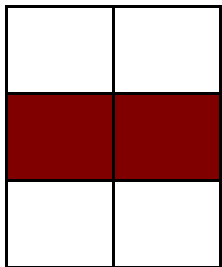
$$\frac{1}{6}$$



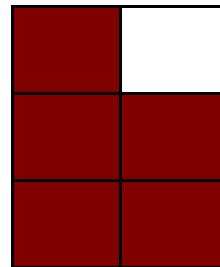
$$\frac{4}{6}$$




$$\frac{3}{6}$$




$$\frac{2}{6}$$



$$\frac{5}{6}$$



$$\frac{3}{6}$$



$$\frac{5}{6}$$