
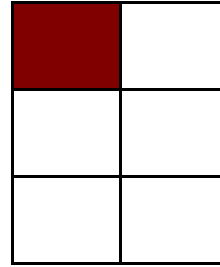


Modeling Sixths (A)


Instructions: Write the correct numerator.



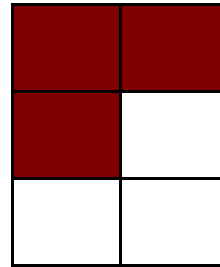
$$\frac{2}{6}$$



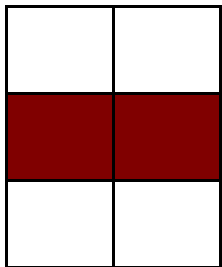
$$\frac{\quad}{6}$$



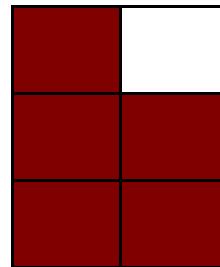
$$\frac{\quad}{6}$$




$$\frac{\quad}{6}$$




$$\frac{\quad}{6}$$



$$\frac{\quad}{6}$$



$$\frac{\quad}{6}$$



$$\frac{\quad}{6}$$