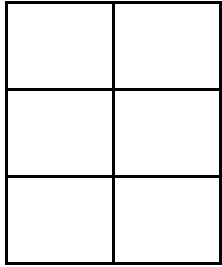
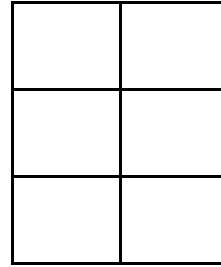


Modeling Sixths (C)

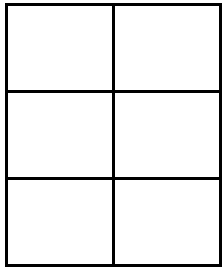
Instructions: Model the fraction by coloring or shading. Try coloring similar fractions in different ways.



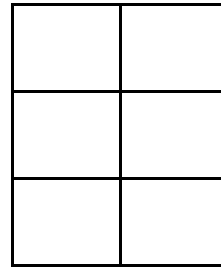
$$\frac{3}{6}$$



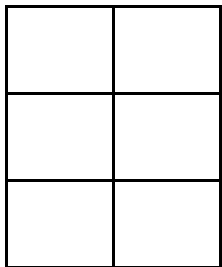
$$\frac{1}{6}$$



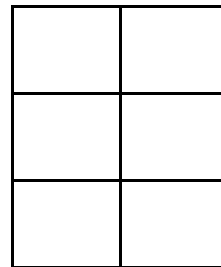
$$\frac{3}{6}$$



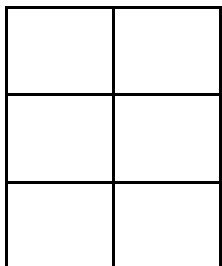
$$\frac{2}{6}$$



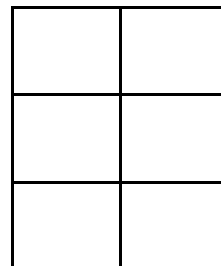
$$\frac{3}{6}$$



$$\frac{4}{6}$$




$$\frac{4}{6}$$



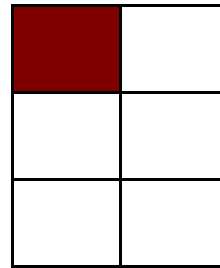
$$\frac{4}{6}$$

Modeling Sixths (C) Answers


Instructions: Model the fraction by coloring or shading. Try coloring similar fractions in different ways.



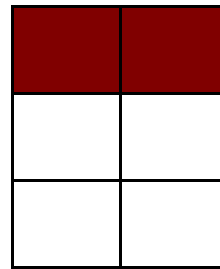
$$\frac{3}{6}$$




$$\frac{1}{6}$$



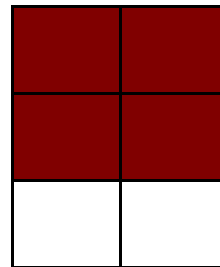
$$\frac{3}{6}$$




$$\frac{2}{6}$$



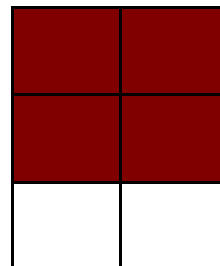
$$\frac{3}{6}$$



$$\frac{4}{6}$$



$$\frac{4}{6}$$



$$\frac{4}{6}$$