



# Modeling Thirds (A)




In this model, there are three parts. One part is shaded

$\frac{1}{3}$  part shaded  
3 parts


For each model, write a fraction that describes it.




—




—




—




—




—




—



—




—



—


# Modeling Thirds (A) Answers




In this model,  
there are three  
parts. One part is  
shaded

$\frac{1}{3}$  part shaded  
 $\frac{1}{3}$  parts


For each model, write a fraction that describes it.




$\frac{1}{3}$




$\frac{1}{3}$




$\frac{2}{3}$




$\frac{1}{3}$




$\frac{1}{3}$




$\frac{2}{3}$



$\frac{0}{3}$



$\frac{3}{3}$



$\frac{1}{3}$