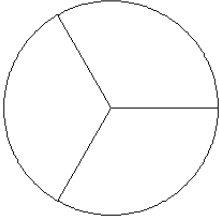


Fraction Models (B)

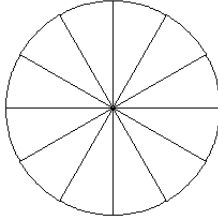
Color sections of each circle to model each fraction.

1.



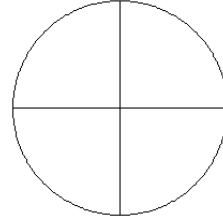
$$\frac{2}{3}$$

2.



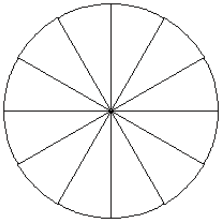
$$\frac{7}{12}$$

3.



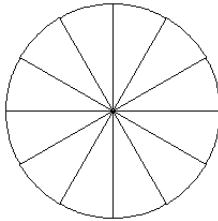
$$\frac{1}{4}$$

4.



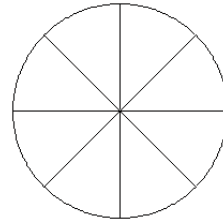
$$\frac{7}{12}$$

5.



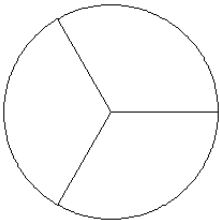
$$\frac{6}{12}$$

6.



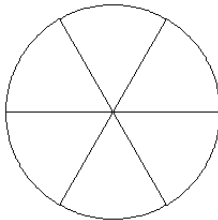
$$\frac{4}{8}$$

7.



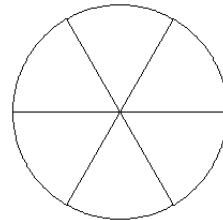
$$\frac{1}{3}$$

8.



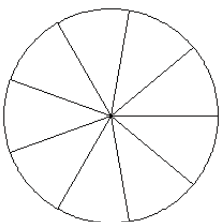
$$\frac{5}{6}$$

9.



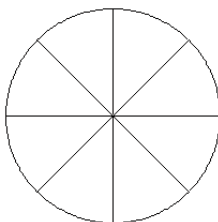
$$\frac{3}{6}$$

10.



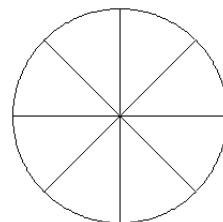
$$\frac{3}{9}$$

11.



$$\frac{6}{8}$$

12.

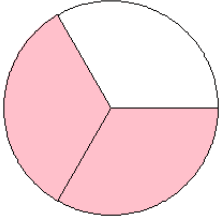


$$\frac{3}{8}$$

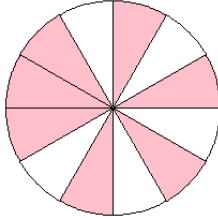
Fraction Models (B) Answers

Color sections of each circle to model each fraction.

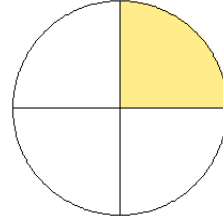
1.



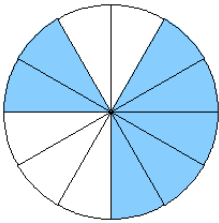
2.



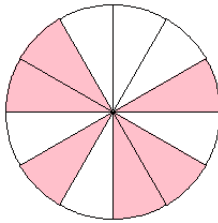
3.



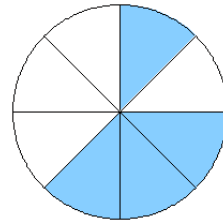
4.



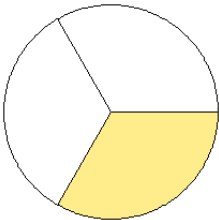
5.



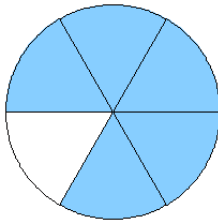
6.



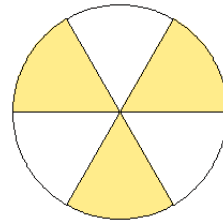
7.



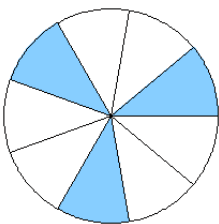
8.



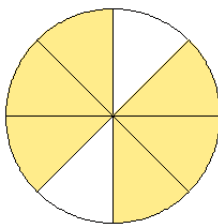
9.



10.



11.



12.

