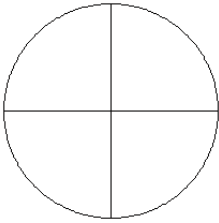


# Fraction Models (E)

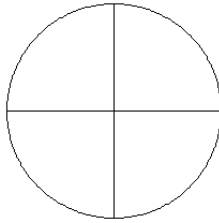
Color sections of each circle to model each fraction.

1.



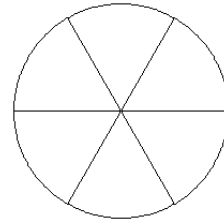
$\frac{1}{4}$

2.



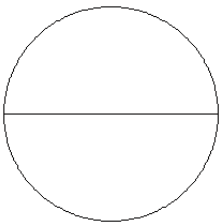
$\frac{1}{4}$

3.



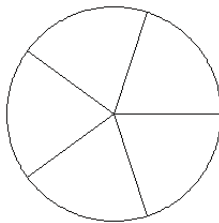
$\frac{2}{6}$

4.



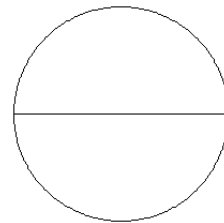
$\frac{0}{2}$

5.



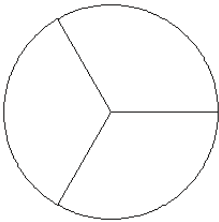
$\frac{2}{5}$

6.



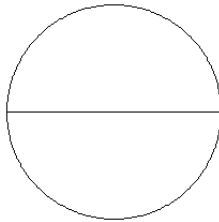
$\frac{0}{2}$

7.



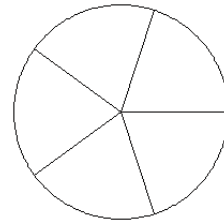
$\frac{1}{3}$

8.



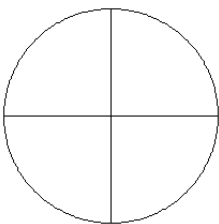
$\frac{1}{2}$

9.



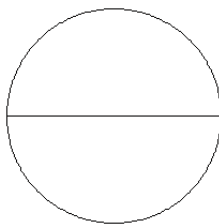
$\frac{4}{5}$

10.



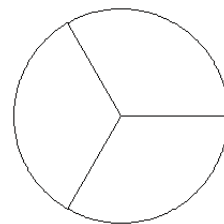
$\frac{3}{4}$

11.



$\frac{1}{2}$

12.

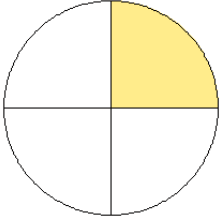


$\frac{1}{3}$

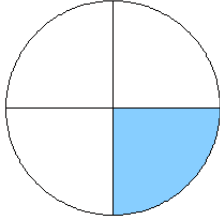
# Fraction Models (E) Answers

Color sections of each circle to model each fraction.

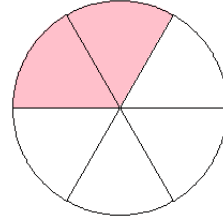
1.



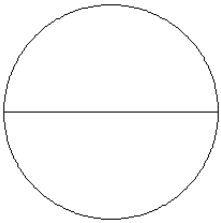
2.



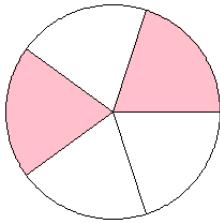
3.



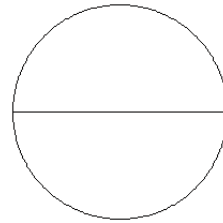
4.



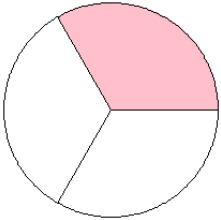
5.



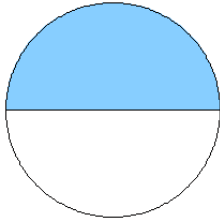
6.



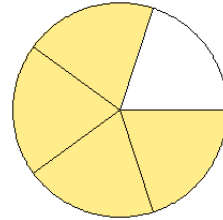
7.



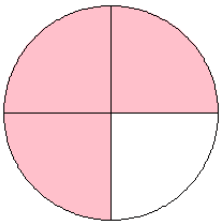
8.



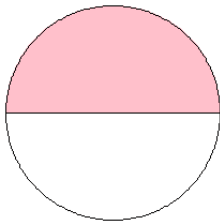
9.



10.



11.



12.

