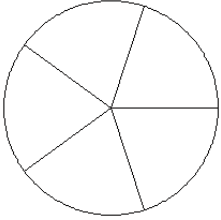


# Fraction Models (F)

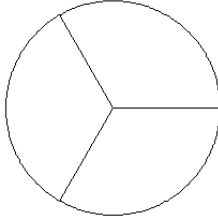
Color sections of each circle to model each fraction.

1.



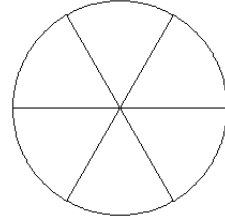
$$\frac{2}{5}$$

2.



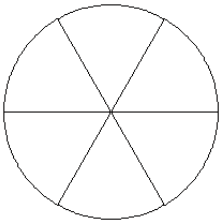
$$\frac{1}{3}$$

3.



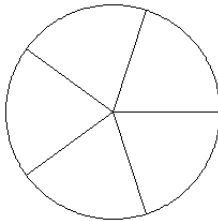
$$\frac{1}{6}$$

4.



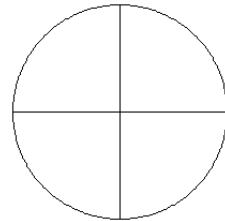
$$\frac{2}{6}$$

5.



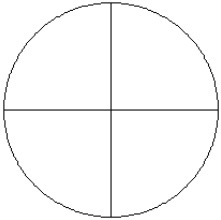
$$\frac{4}{5}$$

6.



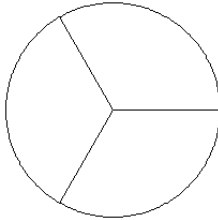
$$\frac{3}{4}$$

7.



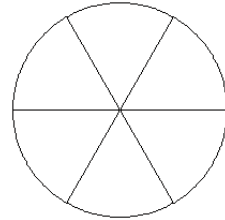
$$\frac{2}{4}$$

8.



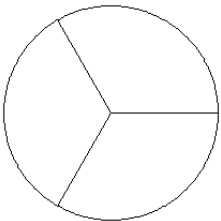
$$\frac{2}{3}$$

9.



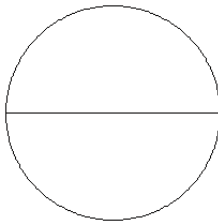
$$\frac{3}{6}$$

10.



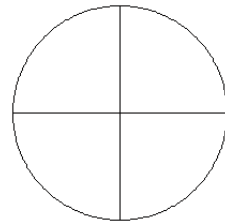
$$\frac{2}{3}$$

11.



$$\frac{0}{2}$$

12.

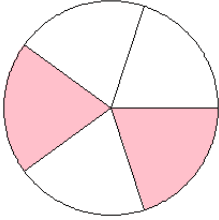


$$\frac{2}{4}$$

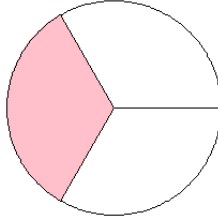
# Fraction Models (F) Answers

Color sections of each circle to model each fraction.

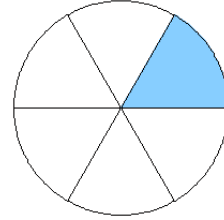
1.



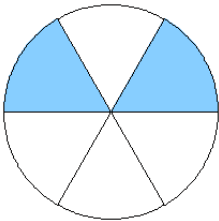
2.



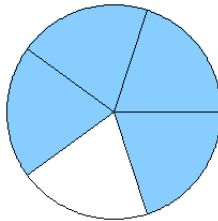
3.



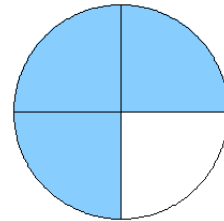
4.



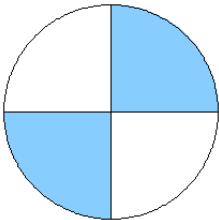
5.



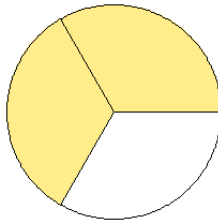
6.



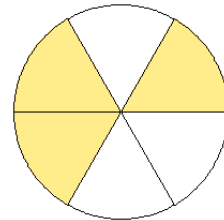
7.



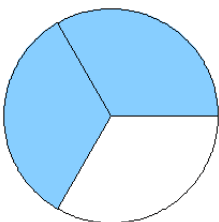
8.



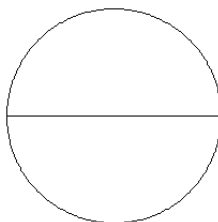
9.



10.



11.



12.

