

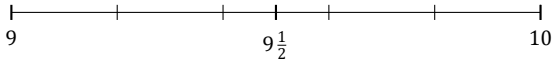
Rounding Mixed Numbers (A)

Name: _____

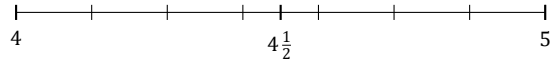
Date: _____

Round each mixed number to the nearest half. Round up if it's a tie.

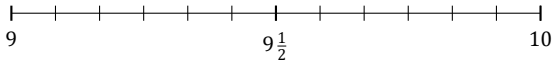
1. $9\frac{4}{5} \approx$



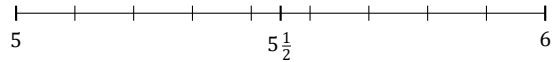
2. $4\frac{6}{7} \approx$



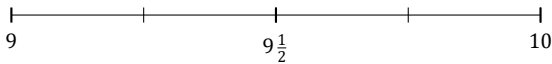
3. $9\frac{3}{12} \approx$



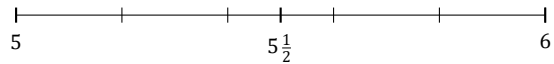
4. $5\frac{7}{9} \approx$



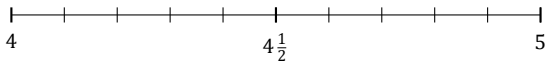
5. $9\frac{2}{4} \approx$



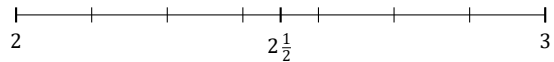
6. $5\frac{2}{5} \approx$



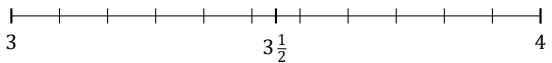
7. $4\frac{7}{10} \approx$



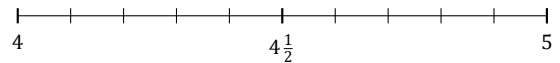
8. $2\frac{4}{7} \approx$



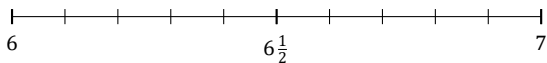
9. $3\frac{5}{11} \approx$



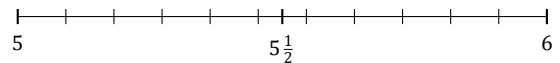
10. $4\frac{4}{10} \approx$



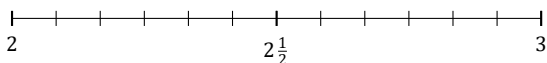
11. $6\frac{9}{10} \approx$



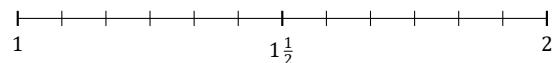
12. $5\frac{8}{11} \approx$



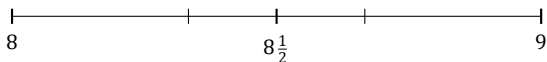
13. $2\frac{9}{12} \approx$



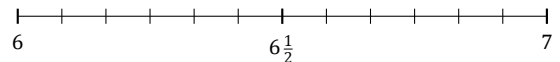
14. $1\frac{10}{12} \approx$



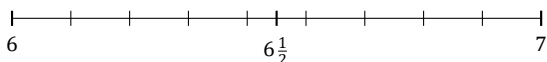
15. $8\frac{2}{3} \approx$



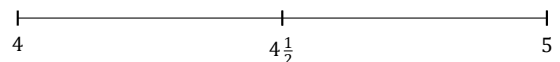
16. $6\frac{1}{12} \approx$



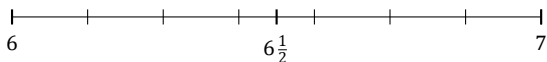
17. $6\frac{5}{9} \approx$



18. $4\frac{1}{2} \approx$



19. $6\frac{3}{7} \approx$



20. $5\frac{7}{8} \approx$

