

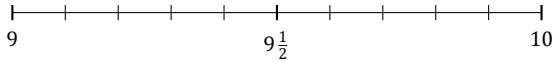
Rounding Mixed Numbers (F)

Name: _____

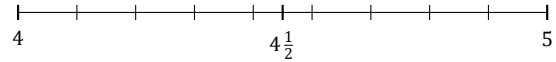
Date: _____

Round each mixed number to the nearest half. Round up if it's a tie.

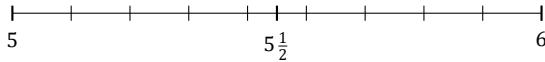
1. $9\frac{5}{10} \approx$



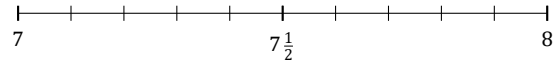
2. $4\frac{6}{9} \approx$



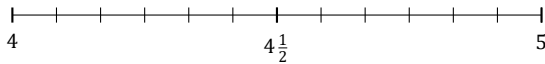
3. $5\frac{7}{9} \approx$



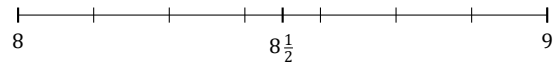
4. $7\frac{4}{10} \approx$



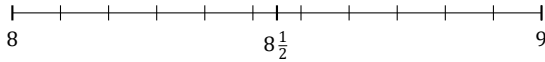
5. $4\frac{11}{12} \approx$



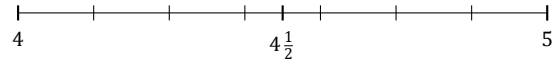
6. $8\frac{3}{7} \approx$



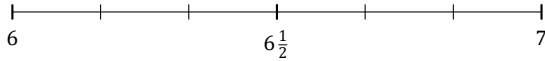
7. $8\frac{6}{11} \approx$



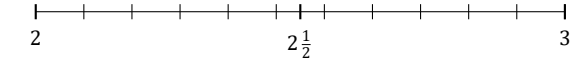
8. $4\frac{4}{7} \approx$



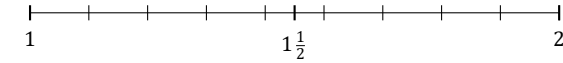
9. $6\frac{5}{6} \approx$



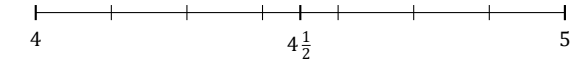
10. $2\frac{10}{11} \approx$



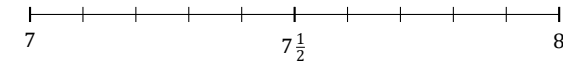
11. $1\frac{5}{9} \approx$



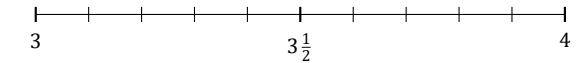
12. $4\frac{2}{7} \approx$



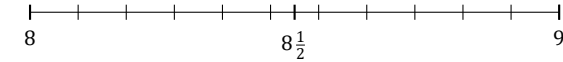
13. $7\frac{6}{10} \approx$



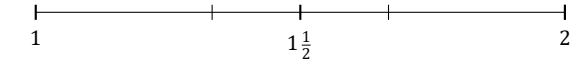
14. $3\frac{3}{10} \approx$



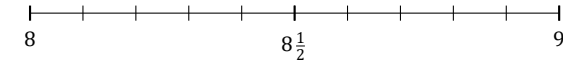
15. $8\frac{2}{11} \approx$



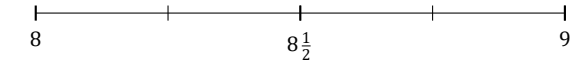
16. $1\frac{2}{3} \approx$



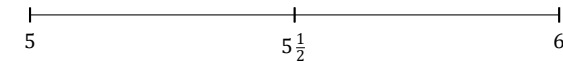
17. $8\frac{7}{10} \approx$



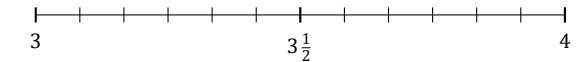
18. $8\frac{2}{4} \approx$



19. $5\frac{1}{2} \approx$



20. $3\frac{2}{12} \approx$



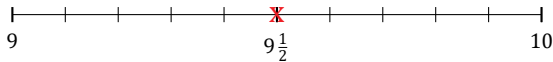
Rounding Mixed Numbers (F) Answers

Name: _____

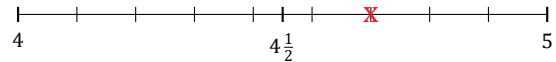
Date: _____

Round each mixed number to the nearest half. Round up if it's a tie.

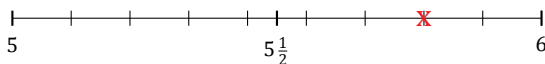
1. $9\frac{5}{10} \approx 9\frac{1}{2}$



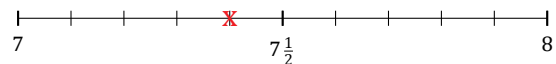
2. $4\frac{6}{9} \approx 4\frac{1}{2}$



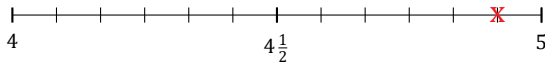
3. $5\frac{7}{9} \approx 6$



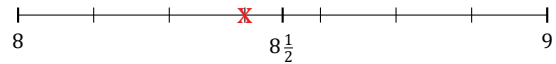
4. $7\frac{4}{10} \approx 7\frac{1}{2}$



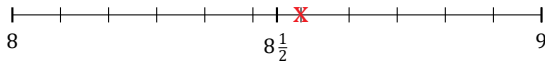
5. $4\frac{11}{12} \approx 5$



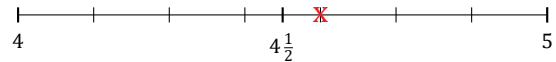
6. $8\frac{3}{7} \approx 8\frac{1}{2}$



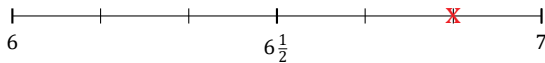
7. $8\frac{6}{11} \approx 8\frac{1}{2}$



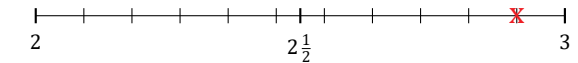
8. $4\frac{4}{7} \approx 4\frac{1}{2}$



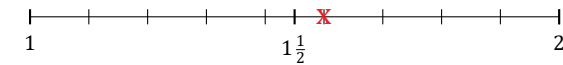
9. $6\frac{5}{6} \approx 7$



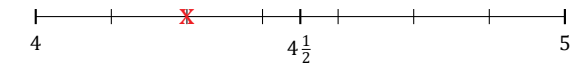
10. $2\frac{10}{11} \approx 3$



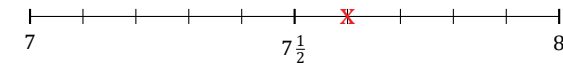
11. $1\frac{5}{9} \approx 1\frac{1}{2}$



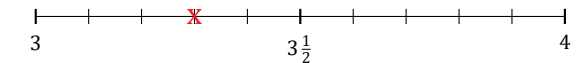
12. $4\frac{2}{7} \approx 4\frac{1}{2}$



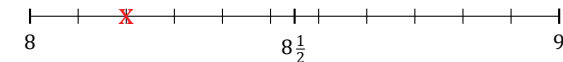
13. $7\frac{6}{10} \approx 7\frac{1}{2}$



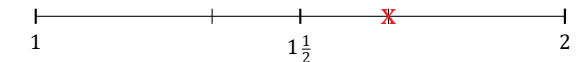
14. $3\frac{3}{10} \approx 3\frac{1}{2}$



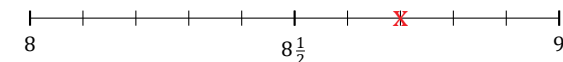
15. $8\frac{2}{11} \approx 8$



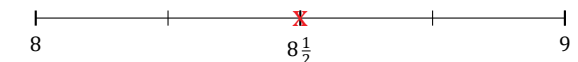
16. $1\frac{2}{3} \approx 1\frac{1}{2}$



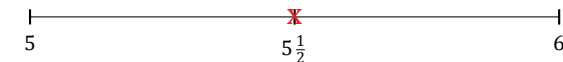
17. $8\frac{7}{10} \approx 8\frac{1}{2}$



18. $8\frac{2}{4} \approx 8\frac{1}{2}$



19. $5\frac{1}{2} \approx 5\frac{1}{2}$



20. $3\frac{2}{12} \approx 3$

