

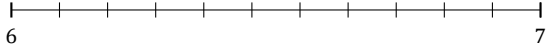
Rounding Mixed Numbers (B)

Name: _____

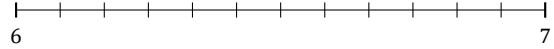
Date: _____

Round each mixed number to the nearest whole. Round up if it's a tie.

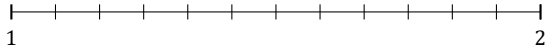
1. $6\frac{4}{11} \approx$



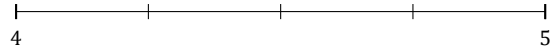
2. $6\frac{3}{12} \approx$



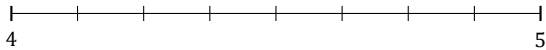
3. $1\frac{9}{12} \approx$



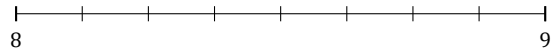
4. $4\frac{1}{4} \approx$



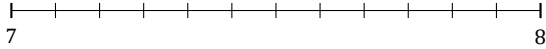
5. $4\frac{4}{8} \approx$




6. $8\frac{3}{8} \approx$



7. $7\frac{6}{12} \approx$




8. $4\frac{1}{9} \approx$



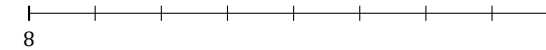
9. $3\frac{1}{5} \approx$



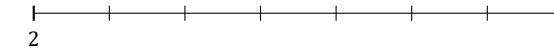
10. $8\frac{2}{3} \approx$



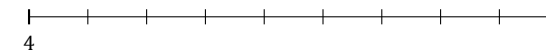
11. $8\frac{6}{8} \approx$



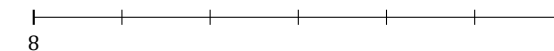
12. $2\frac{2}{7} \approx$



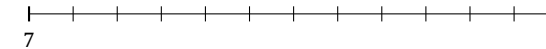
13. $4\frac{4}{9} \approx$



14. $8\frac{5}{6} \approx$



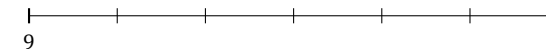
15. $7\frac{2}{12} \approx$



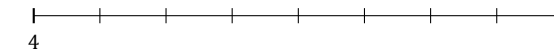
16. $6\frac{4}{5} \approx$



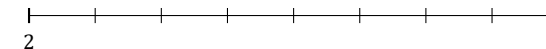
17. $9\frac{2}{6} \approx$



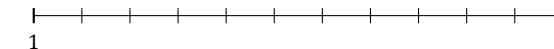
18. $4\frac{5}{8} \approx$



19. $2\frac{7}{8} \approx$



20. $1\frac{9}{11} \approx$



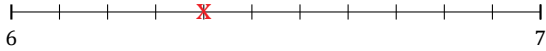
Rounding Mixed Numbers (B) Answers

Name: _____

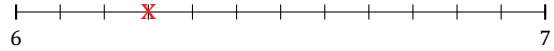
Date: _____

Round each mixed number to the nearest whole. Round up if it's a tie.

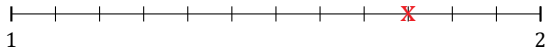
1. $6\frac{4}{11} \approx 6$



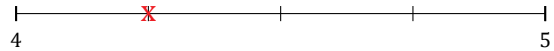
2. $6\frac{3}{12} \approx 6$



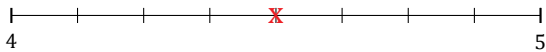
3. $1\frac{9}{12} \approx 2$



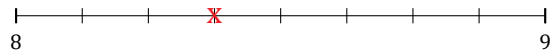
4. $4\frac{1}{4} \approx 4$



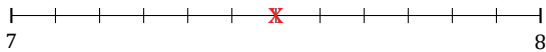
5. $4\frac{4}{8} \approx 5$



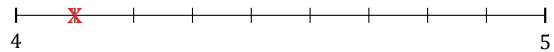
6. $8\frac{3}{8} \approx 8$




7. $7\frac{6}{12} \approx 8$




8. $4\frac{1}{9} \approx 4$



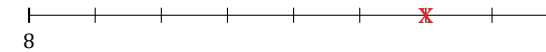
9. $3\frac{1}{5} \approx 3$



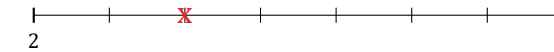
10. $8\frac{2}{3} \approx 9$



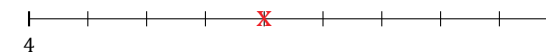
11. $8\frac{6}{8} \approx 9$



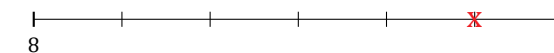
12. $2\frac{2}{7} \approx 2$



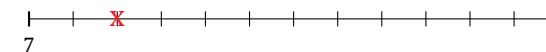
13. $4\frac{4}{9} \approx 4$




14. $8\frac{5}{6} \approx 9$



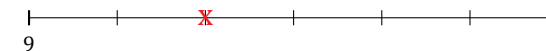
15. $7\frac{2}{12} \approx 7$



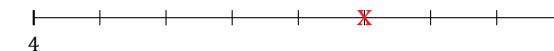
16. $6\frac{4}{5} \approx 7$



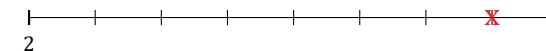
17. $9\frac{2}{6} \approx 9$



18. $4\frac{5}{8} \approx 5$



19. $2\frac{7}{8} \approx 3$



20. $1\frac{9}{11} \approx 2$

