

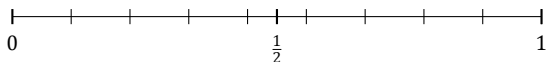
Rounding Fractions (A)

Name: _____

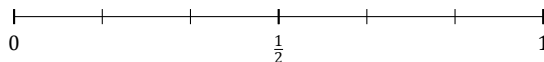
Date: _____

Round each fraction to the nearest half. Round up if it's a tie.

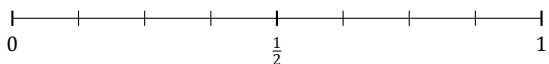
1. $\frac{5}{9} \approx$



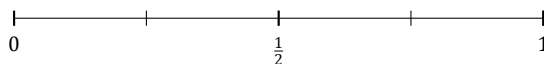
2. $\frac{5}{6} \approx$



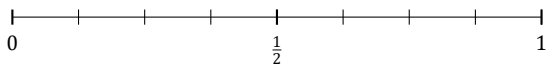
3. $\frac{6}{8} \approx$



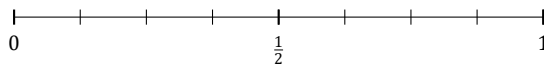
4. $\frac{2}{4} \approx$



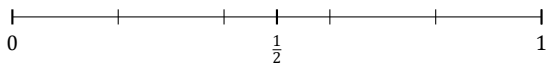
5. $\frac{4}{8} \approx$



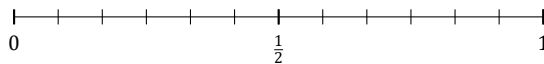
6. $\frac{2}{8} \approx$



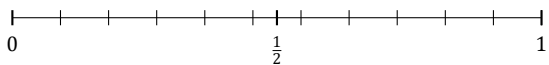
7. $\frac{4}{5} \approx$



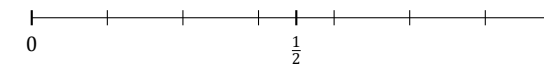
8. $\frac{6}{12} \approx$



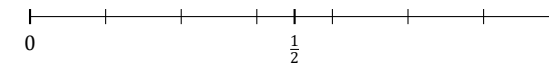
9. $\frac{6}{11} \approx$



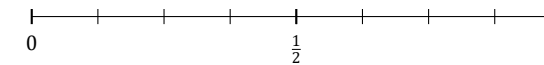
10. $\frac{6}{7} \approx$



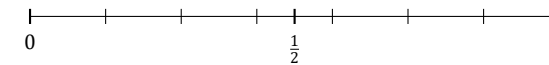
11. $\frac{1}{7} \approx$



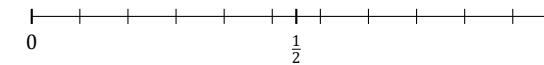
12. $\frac{7}{8} \approx$



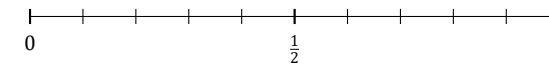
13. $\frac{4}{7} \approx$



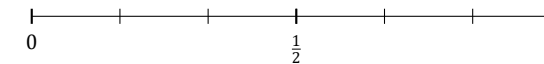
14. $\frac{2}{11} \approx$



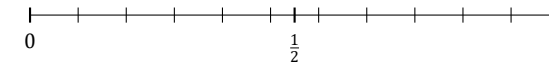
15. $\frac{5}{10} \approx$



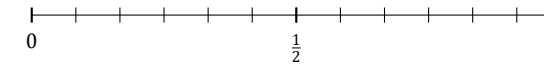
16. $\frac{3}{6} \approx$



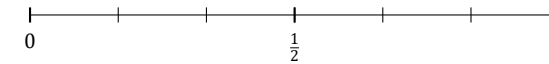
17. $\frac{8}{11} \approx$



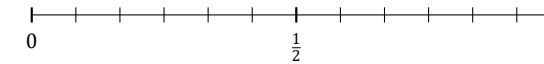
18. $\frac{3}{12} \approx$



19. $\frac{2}{6} \approx$



20. $\frac{1}{12} \approx$



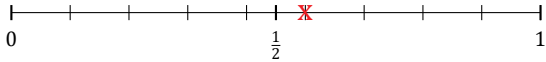
Rounding Fractions (A) Answers

Name: _____

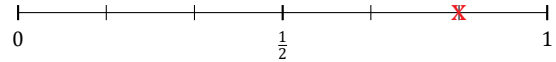
Date: _____

Round each fraction to the nearest half. Round up if it's a tie.

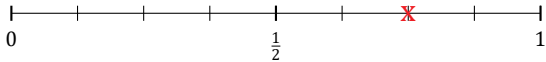
1. $\frac{5}{9} \approx \frac{1}{2}$



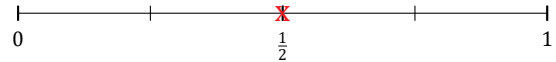
2. $\frac{5}{6} \approx 1$



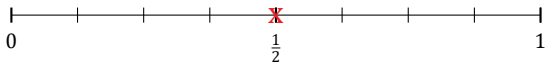
3. $\frac{6}{8} \approx 1$



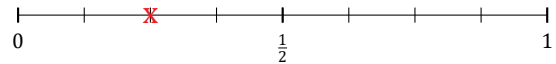
4. $\frac{2}{4} \approx \frac{1}{2}$



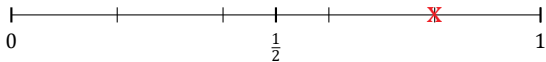
5. $\frac{4}{8} \approx \frac{1}{2}$



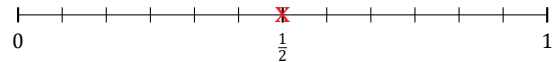
6. $\frac{2}{8} \approx \frac{1}{2}$



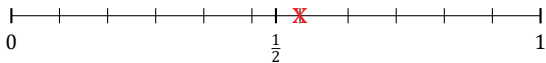
7. $\frac{4}{5} \approx 1$



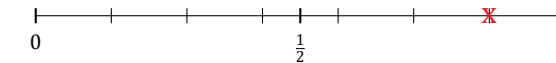
8. $\frac{6}{12} \approx \frac{1}{2}$



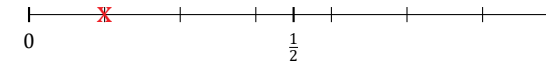
9. $\frac{6}{11} \approx \frac{1}{2}$



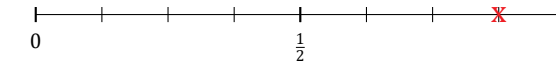
10. $\frac{6}{7} \approx 1$



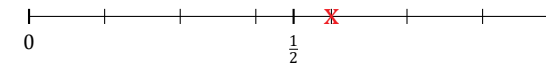
11. $\frac{1}{7} \approx 0$



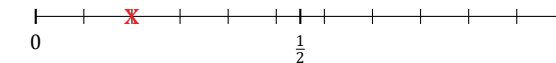
12. $\frac{7}{8} \approx 1$



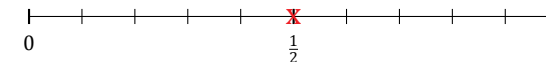
13. $\frac{4}{7} \approx \frac{1}{2}$



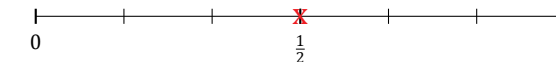
14. $\frac{2}{11} \approx 0$



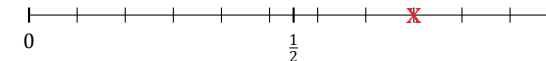
15. $\frac{5}{10} \approx \frac{1}{2}$



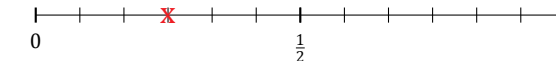
16. $\frac{3}{6} \approx \frac{1}{2}$



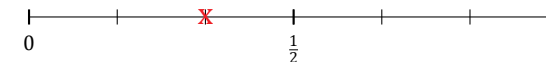
17. $\frac{8}{11} \approx \frac{1}{2}$



18. $\frac{3}{12} \approx \frac{1}{2}$



19. $\frac{2}{6} \approx \frac{1}{2}$



20. $\frac{1}{12} \approx 0$

