

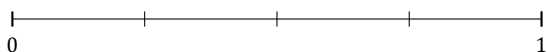
Rounding Fractions (A)

Name: _____

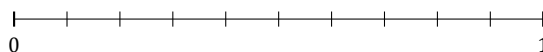
Date: _____

Round each fraction to the nearest whole. Round up if it's a tie.

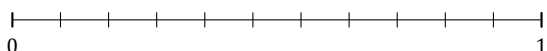
1. $\frac{1}{4} \approx$



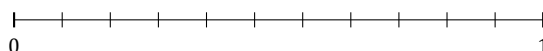
2. $\frac{2}{10} \approx$



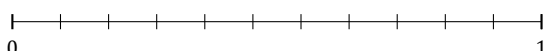
3. $\frac{6}{11} \approx$




4. $\frac{9}{11} \approx$



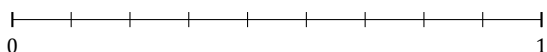
5. $\frac{8}{11} \approx$




6. $\frac{2}{5} \approx$




7. $\frac{1}{9} \approx$



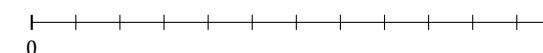
8. $\frac{5}{7} \approx$



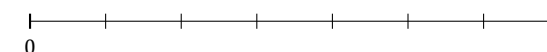
9. $\frac{6}{7} \approx$



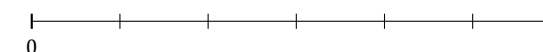
10. $\frac{2}{12} \approx$



11. $\frac{1}{7} \approx$



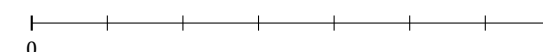
12. $\frac{2}{6} \approx$



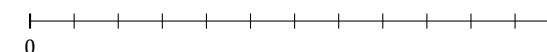
13. $\frac{7}{11} \approx$



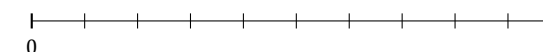
14. $\frac{2}{7} \approx$



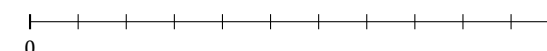
15. $\frac{5}{12} \approx$



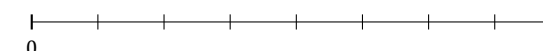
16. $\frac{9}{10} \approx$



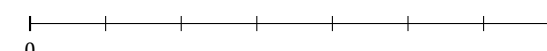
17. $\frac{1}{11} \approx$




18. $\frac{5}{8} \approx$



19. $\frac{4}{7} \approx$



20. $\frac{2}{3} \approx$



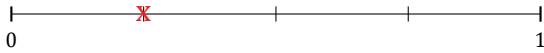
Rounding Fractions (A) Answers

Name: _____

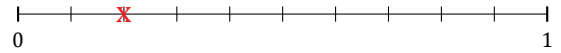
Date: _____

Round each fraction to the nearest whole. Round up if it's a tie.

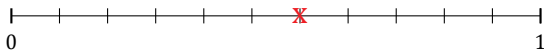
1. $\frac{1}{4} \approx 0$



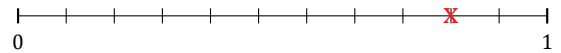
2. $\frac{2}{10} \approx 0$



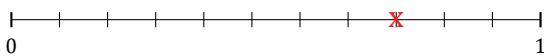
3. $\frac{6}{11} \approx 1$




4. $\frac{9}{11} \approx 1$



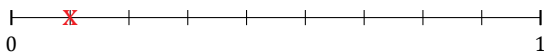
5. $\frac{8}{11} \approx 1$




6. $\frac{2}{5} \approx 0$




7. $\frac{1}{9} \approx 0$



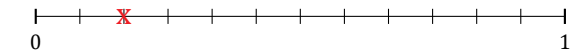
8. $\frac{5}{7} \approx 1$



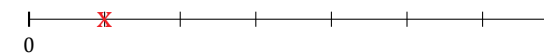
9. $\frac{6}{7} \approx 1$



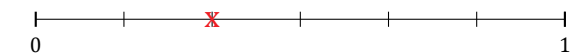
10. $\frac{2}{12} \approx 0$



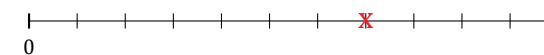
11. $\frac{1}{7} \approx 0$



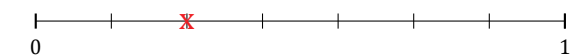
12. $\frac{2}{6} \approx 0$



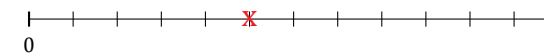
13. $\frac{7}{11} \approx 1$



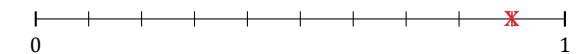
14. $\frac{2}{7} \approx 0$



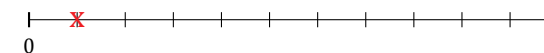
15. $\frac{5}{12} \approx 0$



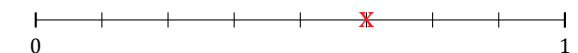
16. $\frac{9}{10} \approx 1$



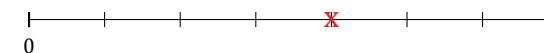
17. $\frac{1}{11} \approx 0$



18. $\frac{5}{8} \approx 1$



19. $\frac{4}{7} \approx 1$



20. $\frac{2}{3} \approx 1$

