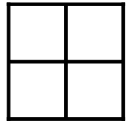
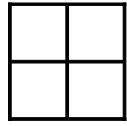


Coloring Fourths (F)

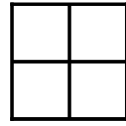
Color to model each fraction.



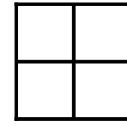
$$\frac{3}{4}$$



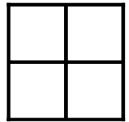
$$\frac{1}{4}$$



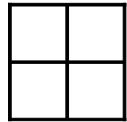
$$\frac{3}{4}$$



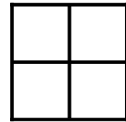
$$\frac{4}{4}$$



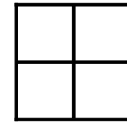
$$\frac{2}{4}$$




$$\frac{3}{4}$$



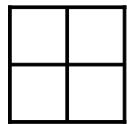
$$\frac{4}{4}$$



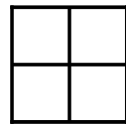
$$\frac{3}{4}$$



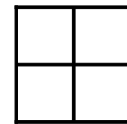
$$\frac{1}{4}$$




$$\frac{4}{4}$$




$$\frac{1}{4}$$



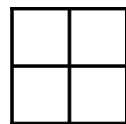
$$\frac{1}{4}$$



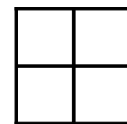
$$\frac{2}{4}$$



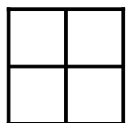
$$\frac{3}{4}$$



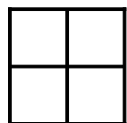
$$\frac{2}{4}$$



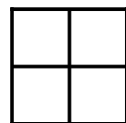
$$\frac{1}{4}$$



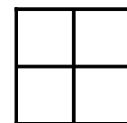
$$\frac{4}{4}$$




$$\frac{3}{4}$$



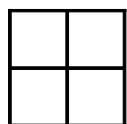
$$\frac{1}{4}$$



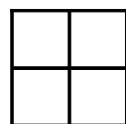
$$\frac{3}{4}$$



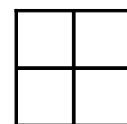
$$\frac{4}{4}$$



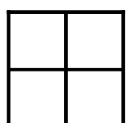
$$\frac{4}{4}$$



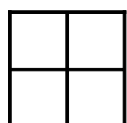
$$\frac{3}{4}$$



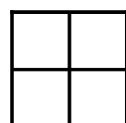
$$\frac{2}{4}$$



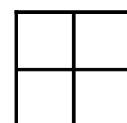
$$\frac{2}{4}$$



$$\frac{1}{4}$$



$$\frac{3}{4}$$




$$\frac{1}{4}$$


Coloring Fourths (F) Answers

Color to model each fraction.


Note: These are suggested answers. Answers may vary.




$$\frac{3}{4}$$




$$\frac{1}{4}$$




$$\frac{3}{4}$$




$$\frac{4}{4}$$




$$\frac{2}{4}$$




$$\frac{3}{4}$$




$$\frac{4}{4}$$




$$\frac{3}{4}$$



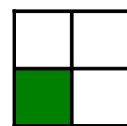
$$\frac{1}{4}$$




$$\frac{4}{4}$$




$$\frac{1}{4}$$




$$\frac{1}{4}$$




$$\frac{2}{4}$$




$$\frac{3}{4}$$



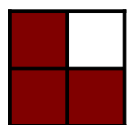
$$\frac{2}{4}$$



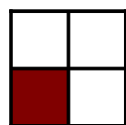
$$\frac{1}{4}$$



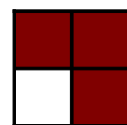
$$\frac{4}{4}$$




$$\frac{3}{4}$$




$$\frac{1}{4}$$




$$\frac{3}{4}$$



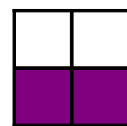
$$\frac{4}{4}$$




$$\frac{4}{4}$$




$$\frac{3}{4}$$




$$\frac{2}{4}$$



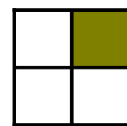
$$\frac{2}{4}$$



$$\frac{1}{4}$$



$$\frac{3}{4}$$



$$\frac{1}{4}$$