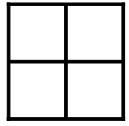
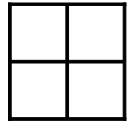


Coloring Fourths (H)

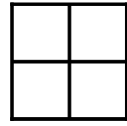
Color to model each fraction.



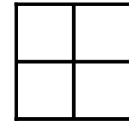
$\frac{1}{4}$



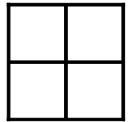
$\frac{3}{4}$



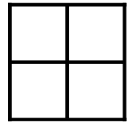
$\frac{2}{4}$



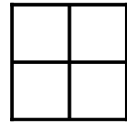
$\frac{4}{4}$



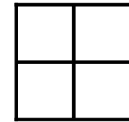
$\frac{3}{4}$




$\frac{1}{4}$




$\frac{1}{4}$



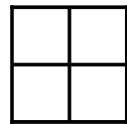
$\frac{1}{4}$



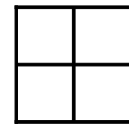
$\frac{1}{4}$




$\frac{1}{4}$




$\frac{1}{4}$



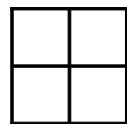
$\frac{3}{4}$



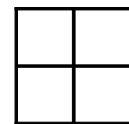
$\frac{3}{4}$



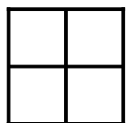
$\frac{2}{4}$



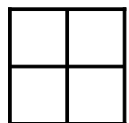
$\frac{3}{4}$



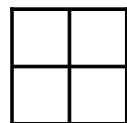
$\frac{3}{4}$



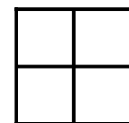
$\frac{4}{4}$




$\frac{1}{4}$




$\frac{2}{4}$



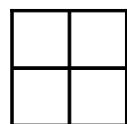
$\frac{1}{4}$



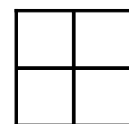
$\frac{4}{4}$



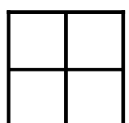
$\frac{2}{4}$



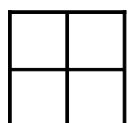
$\frac{1}{4}$



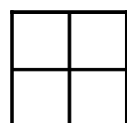
$\frac{3}{4}$



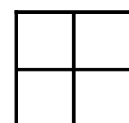
$\frac{2}{4}$



$\frac{4}{4}$



$\frac{2}{4}$




$\frac{4}{4}$


Coloring Fourths (H) Answers

Color to model each fraction.


Note: These are suggested answers. Answers may vary.




$$\frac{1}{4}$$




$$\frac{3}{4}$$




$$\frac{2}{4}$$




$$\frac{4}{4}$$



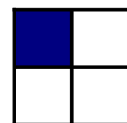
$$\frac{3}{4}$$




$$\frac{1}{4}$$




$$\frac{1}{4}$$



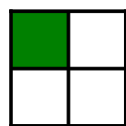
$$\frac{1}{4}$$



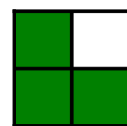
$$\frac{1}{4}$$




$$\frac{1}{4}$$




$$\frac{1}{4}$$




$$\frac{3}{4}$$




$$\frac{3}{4}$$




$$\frac{2}{4}$$



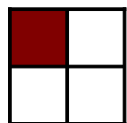
$$\frac{3}{4}$$



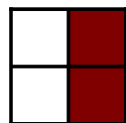
$$\frac{3}{4}$$



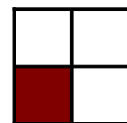
$$\frac{4}{4}$$




$$\frac{1}{4}$$




$$\frac{2}{4}$$




$$\frac{1}{4}$$




$$\frac{4}{4}$$




$$\frac{2}{4}$$




$$\frac{1}{4}$$




$$\frac{3}{4}$$




$$\frac{2}{4}$$



$$\frac{4}{4}$$



$$\frac{2}{4}$$



$$\frac{4}{4}$$