



# Modeling Fourths (A)


Write the correct fraction for each model.



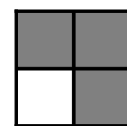
$\frac{3}{4}$




$\frac{\quad}{4}$




$\frac{\quad}{4}$




$\frac{\quad}{4}$



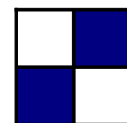
$\frac{\quad}{\quad}$




$\frac{\quad}{\quad}$




$\frac{\quad}{\quad}$




$\frac{\quad}{\quad}$



$\frac{\quad}{\quad}$




$\frac{\quad}{\quad}$




$\frac{\quad}{\quad}$




$\frac{\quad}{\quad}$




$\frac{\quad}{\quad}$




$\frac{\quad}{\quad}$



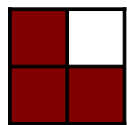
$\frac{\quad}{\quad}$



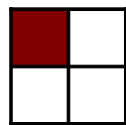
$\frac{\quad}{\quad}$



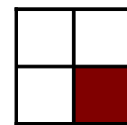
$\frac{\quad}{\quad}$




$\frac{\quad}{\quad}$




$\frac{\quad}{\quad}$




$\frac{\quad}{\quad}$




$\frac{\quad}{\quad}$




$\frac{\quad}{\quad}$




$\frac{\quad}{\quad}$




$\frac{\quad}{\quad}$




$\frac{\quad}{\quad}$



$\frac{\quad}{\quad}$



$\frac{\quad}{\quad}$



$\frac{\quad}{\quad}$