



Modeling Fourths (B)

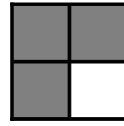
Write the correct fraction for each model.



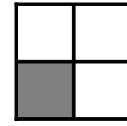
$\frac{3}{4}$



$\frac{\quad}{4}$



$\frac{\quad}{4}$



$\frac{\quad}{4}$

