



# Modeling Fourths (E)


Write the correct fraction for each model.



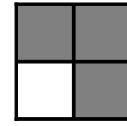
$\frac{3}{4}$




$\frac{\quad}{4}$




$\frac{\quad}{4}$



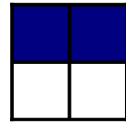
$\frac{\quad}{4}$




—




—




—




—




—




—




—




—




—




—




—



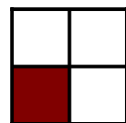
—




—




—




—




—




—




—




—



—



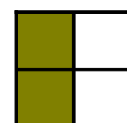
—



—



—



—