



Modeling Fourths (F)


Write the correct fraction for each model.



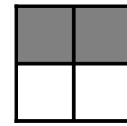
$\frac{4}{4}$



$\frac{3}{4}$



$\frac{4}{4}$



$\frac{2}{4}$

