
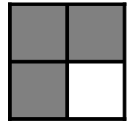


Modeling Fourths (I)

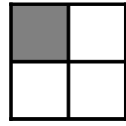
Write the correct fraction for each model.



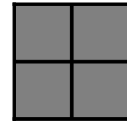
$\frac{3}{4}$




$\frac{4}{4}$




$\frac{4}{4}$



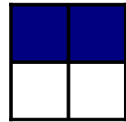
$\frac{4}{4}$



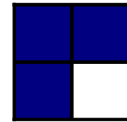
—




—




—




—



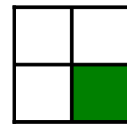
—




—




—




—




—



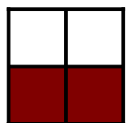
—



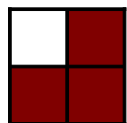
—




—



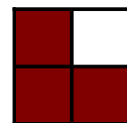
—




—




—



—




—




—




—




—



—



—



—



—