
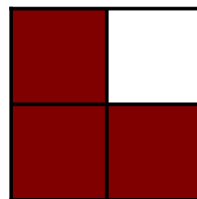


Modeling Fourths (A)


Write the correct fraction for each model.




$$\frac{4}{4}$$




$$\frac{3}{4}$$




$$\frac{4}{4}$$




$$\frac{3}{4}$$




$$\frac{1}{4}$$



$$\frac{1}{4}$$




$$\frac{2}{4}$$



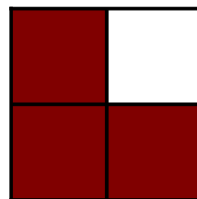
$$\frac{4}{4}$$

Modeling Fourths (A) Answers


Write the correct fraction for each model.




$$\frac{4}{4}$$




$$\frac{3}{4}$$




$$\frac{4}{4}$$




$$\frac{3}{4}$$




$$\frac{1}{4}$$



$$\frac{1}{4}$$




$$\frac{2}{4}$$



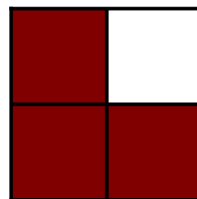
$$\frac{4}{4}$$

Modeling Fourths (B)


Write the correct fraction for each model.




$$\frac{4}{4}$$



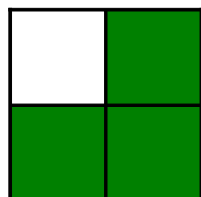
$$\frac{3}{4}$$



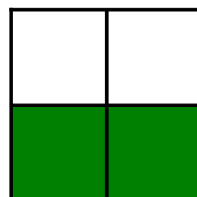
$$\frac{2}{4}$$




$$\frac{3}{4}$$




$$\frac{3}{4}$$



$$\frac{2}{4}$$




$$\frac{1}{4}$$




$$\frac{4}{4}$$

Modeling Fourths (B) Answers


Write the correct fraction for each model.




$$\frac{4}{4}$$




$$\frac{3}{4}$$



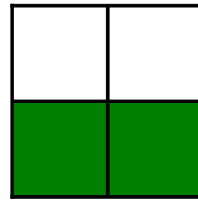
$$\frac{2}{4}$$




$$\frac{3}{4}$$




$$\frac{3}{4}$$



$$\frac{2}{4}$$




$$\frac{1}{4}$$



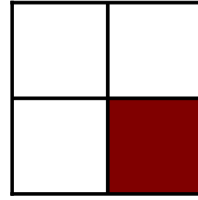
$$\frac{4}{4}$$

Modeling Fourths (C)


Write the correct fraction for each model.




$$\frac{3}{4}$$




$$\frac{1}{4}$$



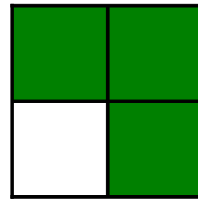
$$\frac{1}{4}$$




$$\frac{3}{4}$$




$$\frac{1}{4}$$



$$\frac{3}{4}$$




$$\frac{4}{4}$$



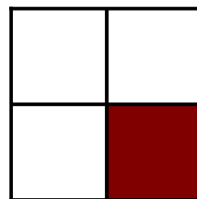
$$\frac{1}{4}$$

Modeling Fourths (C) Answers


Write the correct fraction for each model.




$$\frac{3}{4}$$



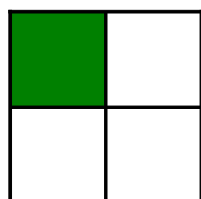
$$\frac{1}{4}$$



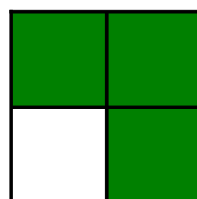
$$\frac{1}{4}$$




$$\frac{3}{4}$$




$$\frac{1}{4}$$



$$\frac{3}{4}$$




$$\frac{4}{4}$$




$$\frac{1}{4}$$

Modeling Fourths (D)


Write the correct fraction for each model.



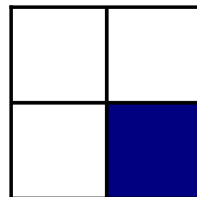
$$\frac{1}{4}$$




$$\frac{4}{4}$$




$$\frac{3}{4}$$




$$\frac{1}{4}$$




$$\frac{4}{4}$$



$$\frac{3}{4}$$



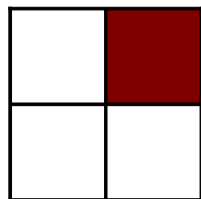
$$\frac{2}{4}$$




$$\frac{4}{4}$$

Modeling Fourths (D) Answers


Write the correct fraction for each model.




$$\frac{1}{4}$$




$$\frac{4}{4}$$



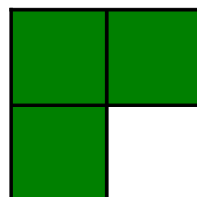
$$\frac{3}{4}$$




$$\frac{1}{4}$$




$$\frac{4}{4}$$



$$\frac{3}{4}$$



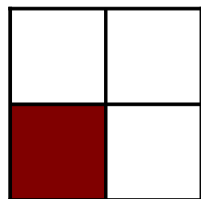
$$\frac{2}{4}$$



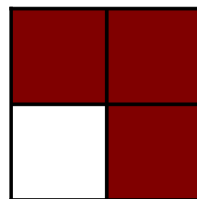
$$\frac{4}{4}$$

Modeling Fourths (E)


Write the correct fraction for each model.



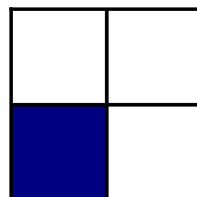
$$\frac{1}{4}$$




$$\frac{4}{4}$$



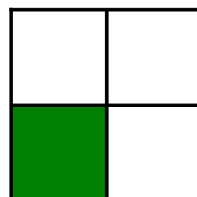
$$\frac{3}{4}$$




$$\frac{1}{4}$$




$$\frac{4}{4}$$



$$\frac{1}{4}$$




$$\frac{1}{4}$$



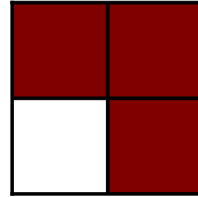
$$\frac{4}{4}$$

Modeling Fourths (E) Answers


Write the correct fraction for each model.



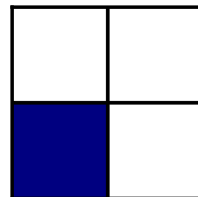
$$\frac{1}{4}$$




$$\frac{3}{4}$$



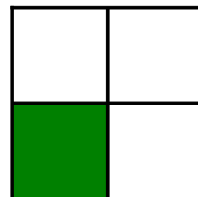
$$\frac{3}{4}$$




$$\frac{1}{4}$$




$$\frac{4}{4}$$



$$\frac{1}{4}$$




$$\frac{1}{4}$$




$$\frac{4}{4}$$

Modeling Fourths (F)


Write the correct fraction for each model.




$$\frac{4}{4}$$




$$\frac{4}{4}$$



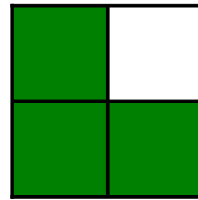
$$\frac{\quad}{\quad}$$




$$\frac{\quad}{\quad}$$




$$\frac{\quad}{\quad}$$



$$\frac{\quad}{\quad}$$




$$\frac{\quad}{\quad}$$




$$\frac{\quad}{\quad}$$

Modeling Fourths (F) Answers


Write the correct fraction for each model.




$$\frac{4}{4}$$




$$\frac{4}{4}$$



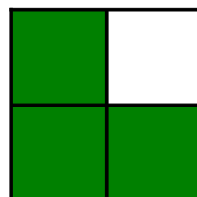
$$\frac{4}{4}$$




$$\frac{2}{4}$$



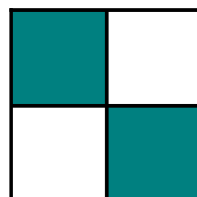
$$\frac{1}{4}$$



$$\frac{3}{4}$$




$$\frac{1}{4}$$



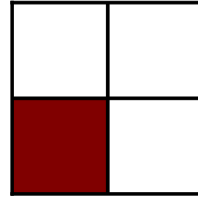
$$\frac{2}{4}$$

Modeling Fourths (G)


Write the correct fraction for each model.




$$\frac{2}{4}$$




$$\frac{1}{4}$$



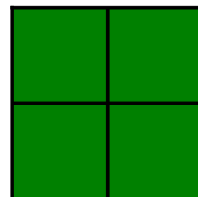
$$\frac{1}{4}$$




$$\frac{4}{4}$$




$$\frac{2}{4}$$



$$\frac{4}{4}$$




$$\frac{2}{4}$$



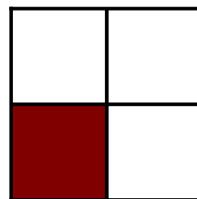
$$\frac{2}{4}$$

Modeling Fourths (G) Answers


Write the correct fraction for each model.




$$\frac{2}{4}$$




$$\frac{1}{4}$$



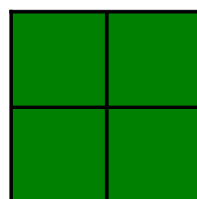
$$\frac{1}{4}$$




$$\frac{4}{4}$$




$$\frac{2}{4}$$



$$\frac{4}{4}$$




$$\frac{2}{4}$$



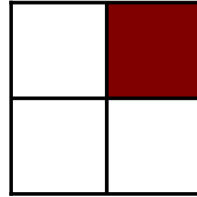
$$\frac{2}{4}$$

Modeling Fourths (H)


Write the correct fraction for each model.




$$\frac{3}{4}$$




$$\frac{1}{4}$$



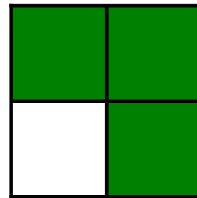
$$\frac{4}{4}$$




$$\frac{1}{4}$$



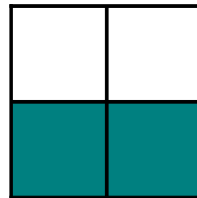
$$\frac{1}{4}$$



$$\frac{3}{4}$$



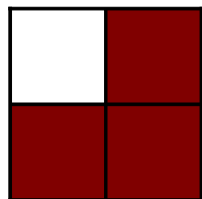
$$\frac{2}{4}$$



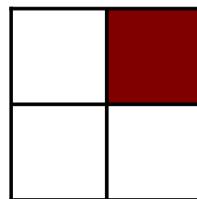
$$\frac{2}{4}$$

Modeling Fourths (H) Answers


Write the correct fraction for each model.



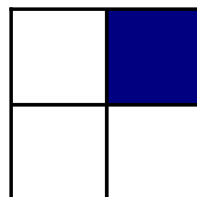
$$\frac{3}{4}$$




$$\frac{1}{4}$$



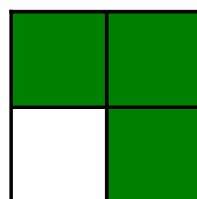
$$\frac{4}{4}$$




$$\frac{1}{4}$$




$$\frac{1}{4}$$



$$\frac{3}{4}$$




$$\frac{2}{4}$$




$$\frac{2}{4}$$

Modeling Fourths (I)


Write the correct fraction for each model.



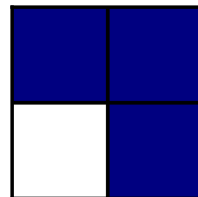
$$\frac{4}{4}$$




$$\frac{2}{4}$$



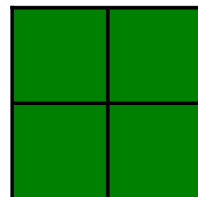
$$\frac{1}{4}$$




$$\frac{3}{4}$$




$$\frac{2}{4}$$



$$\frac{4}{4}$$




$$\frac{1}{4}$$




$$\frac{4}{4}$$

Modeling Fourths (I) Answers


Write the correct fraction for each model.



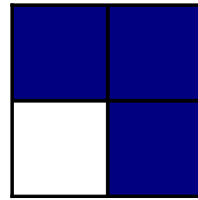
$$\frac{4}{4}$$




$$\frac{2}{4}$$



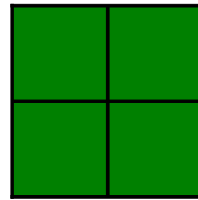
$$\frac{1}{4}$$




$$\frac{3}{4}$$




$$\frac{2}{4}$$



$$\frac{4}{4}$$




$$\frac{1}{4}$$




$$\frac{4}{4}$$

Modeling Fourths (J)


Write the correct fraction for each model.




$$\frac{4}{4}$$



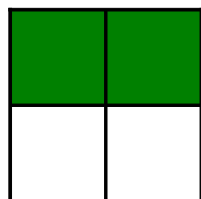
$$\frac{4}{4}$$



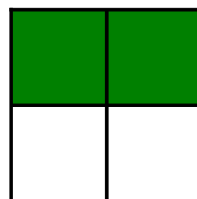
$$\frac{1}{4}$$




$$\frac{2}{4}$$




$$\frac{2}{4}$$



$$\frac{2}{4}$$




$$\frac{1}{4}$$




$$\frac{1}{4}$$

Modeling Fourths (J) Answers


Write the correct fraction for each model.



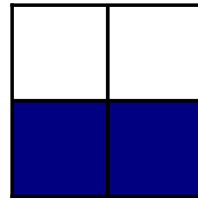
$$\frac{4}{4}$$




$$\frac{4}{4}$$



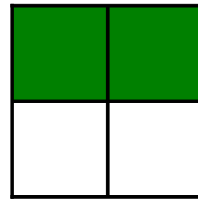
$$\frac{1}{4}$$




$$\frac{2}{4}$$




$$\frac{2}{4}$$



$$\frac{2}{4}$$



$$\frac{1}{4}$$



$$\frac{1}{4}$$