



Modeling Fourths (A)


Write the correct fraction for each model.



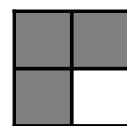
$\frac{3}{4}$



$\frac{4}{4}$



$\frac{1}{4}$



$\frac{2}{4}$

