



Modeling Fourths (F)

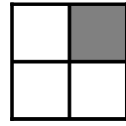
Write the correct fraction for each model.



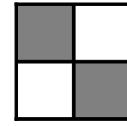
$\frac{3}{4}$




$\frac{2}{4}$




$\frac{2}{4}$




$\frac{2}{4}$



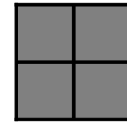
—




—




—




—



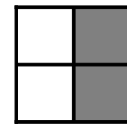
—




—




—




—



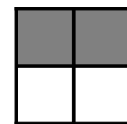
—




—




—



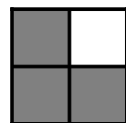
—



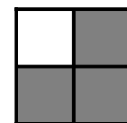
—




—




—




—




—




—




—



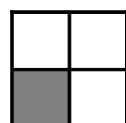
—




—



—



—



—