



Modeling Fourths (I)


Write the correct fraction for each model.



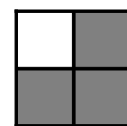
$\frac{4}{4}$




$\frac{\quad}{4}$




$\frac{\quad}{4}$




$\frac{\quad}{4}$



$\frac{\quad}{\quad}$




$\frac{\quad}{\quad}$




$\frac{\quad}{\quad}$




$\frac{\quad}{\quad}$



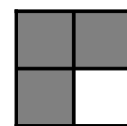
$\frac{\quad}{\quad}$




$\frac{\quad}{\quad}$




$\frac{\quad}{\quad}$




$\frac{\quad}{\quad}$




$\frac{\quad}{\quad}$




$\frac{\quad}{\quad}$




$\frac{\quad}{\quad}$




$\frac{\quad}{\quad}$



$\frac{\quad}{\quad}$




$\frac{\quad}{\quad}$




$\frac{\quad}{\quad}$




$\frac{\quad}{\quad}$



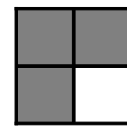
$\frac{\quad}{\quad}$




$\frac{\quad}{\quad}$




$\frac{\quad}{\quad}$




$\frac{\quad}{\quad}$



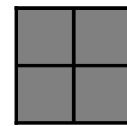
$\frac{\quad}{\quad}$



$\frac{\quad}{\quad}$



$\frac{\quad}{\quad}$



$\frac{\quad}{\quad}$