
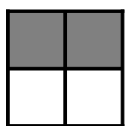


# Modeling Fourths (J)


Write the correct fraction for each model.



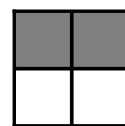
$\frac{2}{4}$




$\frac{\quad}{4}$




$\frac{\quad}{4}$




$\frac{\quad}{4}$



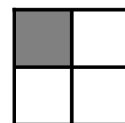
$\frac{\quad}{\quad}$




$\frac{\quad}{\quad}$




$\frac{\quad}{\quad}$




$\frac{\quad}{\quad}$



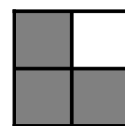
$\frac{\quad}{\quad}$




$\frac{\quad}{\quad}$




$\frac{\quad}{\quad}$




$\frac{\quad}{\quad}$



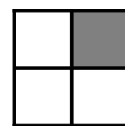
$\frac{\quad}{\quad}$




$\frac{\quad}{\quad}$




$\frac{\quad}{\quad}$




$\frac{\quad}{\quad}$



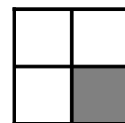
$\frac{\quad}{\quad}$




$\frac{\quad}{\quad}$




$\frac{\quad}{\quad}$




$\frac{\quad}{\quad}$



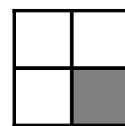
$\frac{\quad}{\quad}$




$\frac{\quad}{\quad}$




$\frac{\quad}{\quad}$




$\frac{\quad}{\quad}$



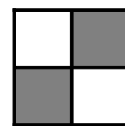
$\frac{\quad}{\quad}$



$\frac{\quad}{\quad}$




$\frac{\quad}{\quad}$



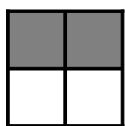
$\frac{\quad}{\quad}$

# Modeling Fourths (J) Answers


Write the correct fraction for each model.



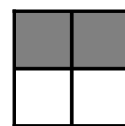
$$\frac{2}{4}$$




$$\frac{2}{4}$$




$$\frac{2}{4}$$




$$\frac{2}{4}$$



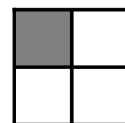
$$\frac{1}{4}$$




$$\frac{4}{4}$$




$$\frac{1}{4}$$




$$\frac{1}{4}$$



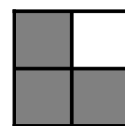
$$\frac{4}{4}$$




$$\frac{1}{4}$$




$$\frac{4}{4}$$




$$\frac{3}{4}$$



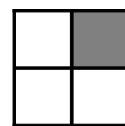
$$\frac{2}{4}$$




$$\frac{3}{4}$$




$$\frac{4}{4}$$




$$\frac{1}{4}$$



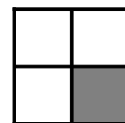
$$\frac{1}{4}$$




$$\frac{4}{4}$$




$$\frac{3}{4}$$




$$\frac{1}{4}$$



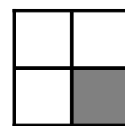
$$\frac{2}{4}$$




$$\frac{4}{4}$$




$$\frac{4}{4}$$




$$\frac{1}{4}$$



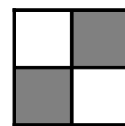
$$\frac{4}{4}$$



$$\frac{2}{4}$$



$$\frac{4}{4}$$



$$\frac{2}{4}$$