
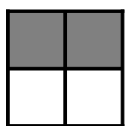


# Modeling Fourths (J)


Write the correct fraction for each model.



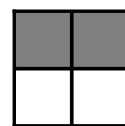
$\frac{2}{4}$




$\frac{\quad}{4}$




$\frac{\quad}{4}$




$\frac{\quad}{4}$



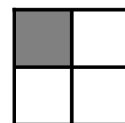
$\frac{\quad}{\quad}$




$\frac{\quad}{\quad}$




$\frac{\quad}{\quad}$




$\frac{\quad}{\quad}$



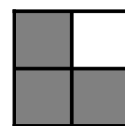
$\frac{\quad}{\quad}$




$\frac{\quad}{\quad}$




$\frac{\quad}{\quad}$




$\frac{\quad}{\quad}$



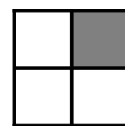
$\frac{\quad}{\quad}$




$\frac{\quad}{\quad}$




$\frac{\quad}{\quad}$




$\frac{\quad}{\quad}$



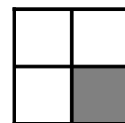
$\frac{\quad}{\quad}$




$\frac{\quad}{\quad}$




$\frac{\quad}{\quad}$




$\frac{\quad}{\quad}$



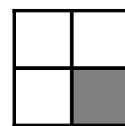
$\frac{\quad}{\quad}$




$\frac{\quad}{\quad}$




$\frac{\quad}{\quad}$




$\frac{\quad}{\quad}$



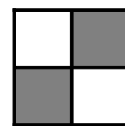
$\frac{\quad}{\quad}$



$\frac{\quad}{\quad}$



$\frac{\quad}{\quad}$



$\frac{\quad}{\quad}$