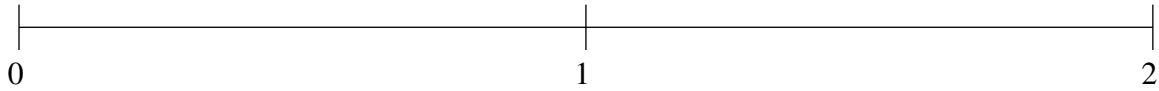


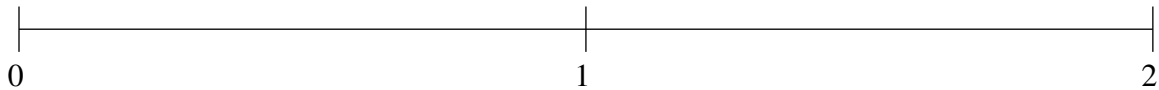
Ordering Fractions (I)

Order each set of fractions using the number line.

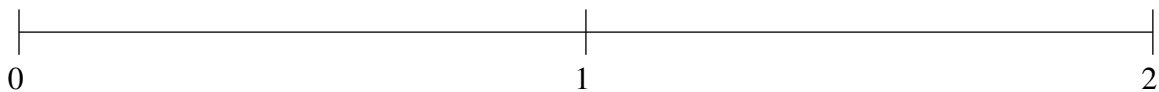
$$\frac{4}{5}, 1\frac{4}{5}, \frac{1}{5}, 1\frac{1}{2}, \frac{1}{2}$$



$$\frac{1}{5}, 1\frac{1}{2}, 1\frac{4}{5}, 1\frac{1}{5}, \frac{1}{2}$$



$$1\frac{4}{5}, 1\frac{1}{5}, \frac{1}{5}, 1\frac{1}{2}, \frac{3}{5}$$

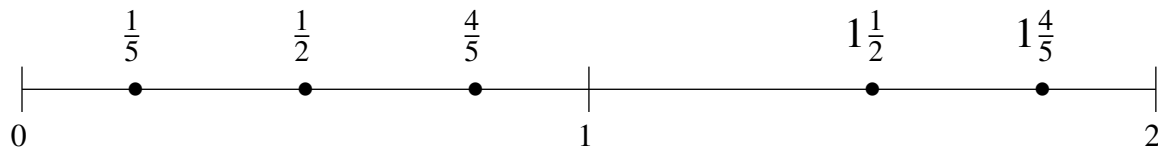


Ordering Fractions (I) Answers

Order each set of fractions using the number line.

$$\frac{4}{5}, 1\frac{4}{5}, \frac{1}{5}, 1\frac{1}{2}, \frac{1}{2}$$

$$\frac{1}{5}, \frac{1}{2}, \frac{4}{5}, 1\frac{1}{2}, 1\frac{4}{5}$$



$$\frac{1}{5}, 1\frac{1}{2}, 1\frac{4}{5}, 1\frac{1}{5}, \frac{1}{2}$$

$$\frac{1}{5}, \frac{1}{2}, 1\frac{1}{5}, 1\frac{1}{2}, 1\frac{4}{5}$$



$$1\frac{4}{5}, 1\frac{1}{5}, \frac{1}{5}, 1\frac{1}{2}, \frac{3}{5}$$

$$\frac{1}{5}, \frac{3}{5}, 1\frac{1}{5}, 1\frac{1}{2}, 1\frac{4}{5}$$

