

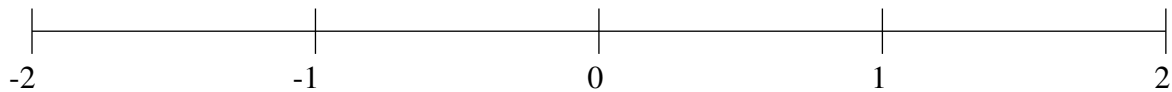
Ordering Fractions (B)

Order each set of fractions using the number line.

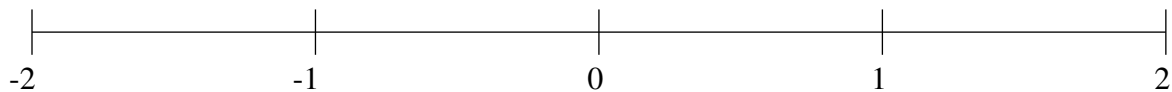
$$\frac{1}{2}, -1\frac{4}{5}, -1\frac{1}{5}, -\frac{1}{2}, 1\frac{4}{5}, -1\frac{1}{2}, -\frac{4}{5}, 1\frac{2}{5}$$



$$1\frac{1}{5}, -\frac{4}{5}, \frac{4}{5}, 1\frac{3}{5}, \frac{1}{2}, -1\frac{1}{5}, -1\frac{1}{2}, -\frac{1}{2}$$



$$\frac{1}{5}, -1\frac{1}{2}, 1\frac{1}{2}, -\frac{1}{10}, 1\frac{1}{5}, -\frac{4}{5}, -\frac{1}{2}, 1\frac{4}{5}$$

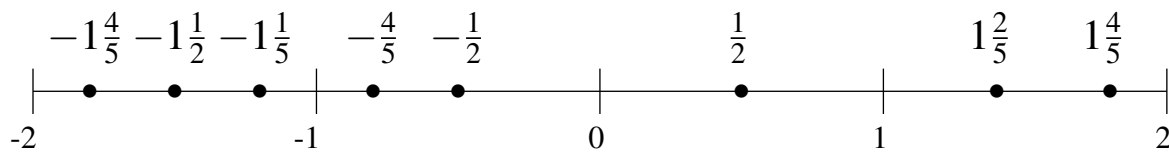


Ordering Fractions (B) Answers

Order each set of fractions using the number line.

$$\frac{1}{2}, -1\frac{4}{5}, -1\frac{1}{5}, -\frac{1}{2}, 1\frac{4}{5}, -1\frac{1}{2}, -\frac{4}{5}, 1\frac{2}{5}$$

$$-1\frac{4}{5}, -1\frac{1}{2}, -1\frac{1}{5}, -\frac{4}{5}, -\frac{1}{2}, \frac{1}{2}, 1\frac{2}{5}, 1\frac{4}{5}$$



$$1\frac{1}{5}, -\frac{4}{5}, \frac{4}{5}, 1\frac{3}{5}, \frac{1}{2}, -1\frac{1}{5}, -1\frac{1}{2}, -\frac{1}{2}$$

$$-1\frac{1}{2}, -1\frac{1}{5}, -\frac{4}{5}, -\frac{1}{2}, \frac{1}{2}, \frac{4}{5}, 1\frac{1}{5}, 1\frac{3}{5}$$



$$\frac{1}{5}, -1\frac{1}{2}, 1\frac{1}{2}, -\frac{1}{10}, 1\frac{1}{5}, -\frac{4}{5}, -\frac{1}{2}, 1\frac{4}{5}$$

$$-1\frac{1}{2}, -\frac{4}{5}, -\frac{1}{2}, -\frac{1}{10}, \frac{1}{5}, 1\frac{1}{5}, 1\frac{1}{2}, 1\frac{4}{5}$$

