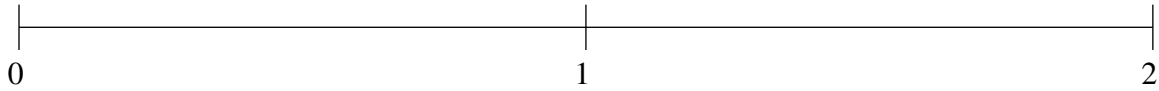


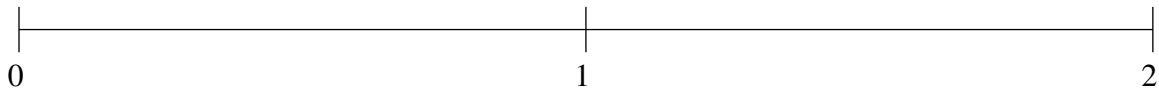
## Ordering Fractions (C)

Order each set of fractions using the number line.

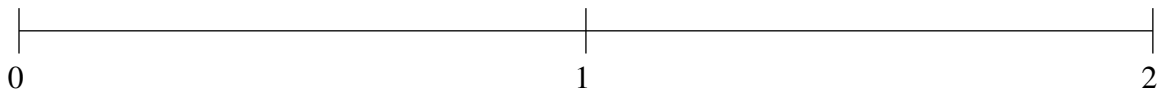
$$\frac{7}{12}, 1\frac{2}{3}, 1\frac{7}{8}, \frac{1}{10}, 1\frac{1}{5}$$



$$\frac{3}{7}, \frac{10}{11}, 1\frac{1}{7}, 1\frac{5}{6}, 1\frac{9}{22}$$



$$\frac{1}{2}, \frac{1}{6}, 1\frac{1}{2}, 1\frac{5}{7}, 1\frac{1}{4}$$

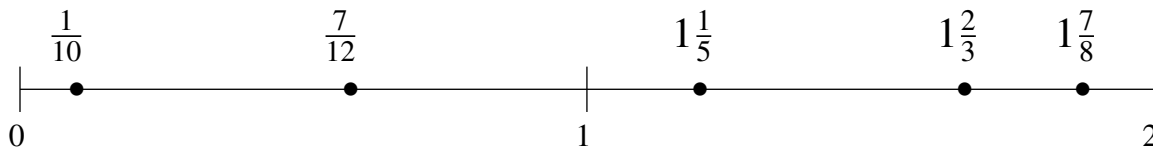


## Ordering Fractions (C) Answers

Order each set of fractions using the number line.

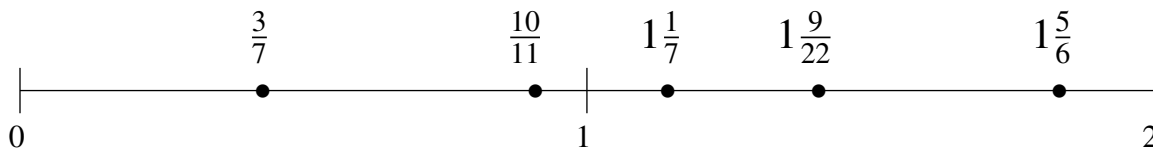
$$\frac{7}{12}, 1\frac{2}{3}, 1\frac{7}{8}, \frac{1}{10}, 1\frac{1}{5}$$

$$\frac{1}{10}, \frac{7}{12}, 1\frac{1}{5}, 1\frac{2}{3}, 1\frac{7}{8}$$



$$\frac{3}{7}, \frac{10}{11}, 1\frac{1}{7}, 1\frac{5}{6}, 1\frac{9}{22}$$

$$\frac{3}{7}, \frac{10}{11}, 1\frac{1}{7}, 1\frac{9}{22}, 1\frac{5}{6}$$



$$\frac{1}{2}, \frac{1}{6}, 1\frac{1}{2}, 1\frac{5}{7}, 1\frac{1}{4}$$

$$\frac{1}{6}, \frac{1}{2}, 1\frac{1}{4}, 1\frac{1}{2}, 1\frac{5}{7}$$

