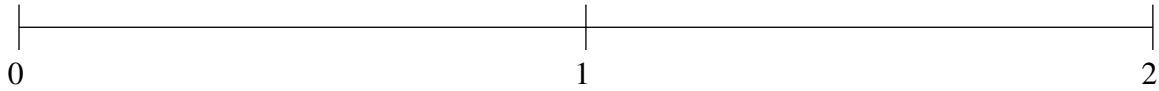


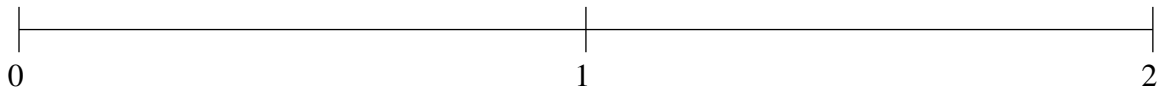
## Ordering Fractions (A)

Order each set of fractions using the number line.

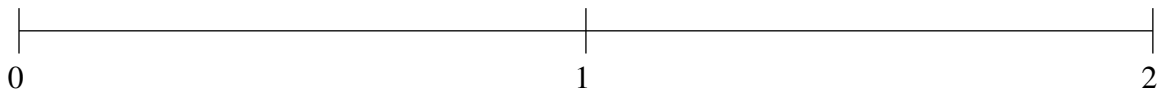
$$\frac{1}{6}, \frac{1}{2}, 1\frac{3}{4}, 1\frac{1}{3}, \frac{11}{12}$$



$$1\frac{1}{2}, \frac{5}{8}, \frac{1}{4}, 1\frac{11}{12}, 1\frac{1}{4}$$



$$\frac{1}{2}, \frac{1}{4}, \frac{5}{6}, 1\frac{1}{6}, 1\frac{11}{12}$$

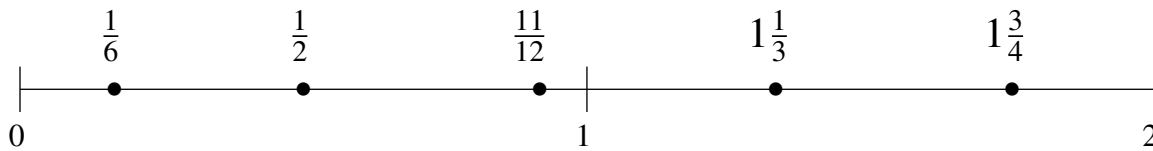


## Ordering Fractions (A) Answers

Order each set of fractions using the number line.

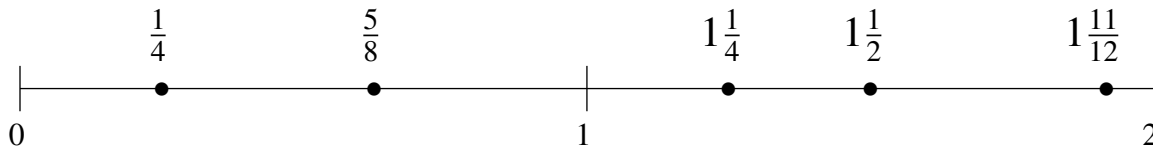
$$\frac{1}{6}, \frac{1}{2}, 1\frac{3}{4}, 1\frac{1}{3}, \frac{11}{12}$$

$$\frac{1}{6}, \frac{1}{2}, \frac{11}{12}, 1\frac{1}{3}, 1\frac{3}{4}$$



$$1\frac{1}{2}, \frac{5}{8}, \frac{1}{4}, 1\frac{11}{12}, 1\frac{1}{4}$$

$$\frac{1}{4}, \frac{5}{8}, 1\frac{1}{4}, 1\frac{1}{2}, 1\frac{11}{12}$$



$$\frac{1}{2}, \frac{1}{4}, \frac{5}{6}, 1\frac{1}{6}, 1\frac{11}{12}$$

$$\frac{1}{4}, \frac{1}{2}, \frac{5}{6}, 1\frac{1}{6}, 1\frac{11}{12}$$

