

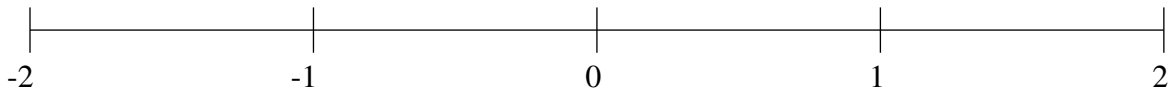
Ordering Fractions (H)

Order each set of fractions using the number line.

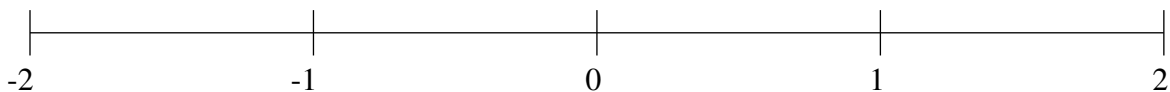
$$1\frac{5}{6}, \frac{2}{7}, 1\frac{1}{2}, 1\frac{1}{11}, \frac{1}{2}, -\frac{5}{7}, -\frac{1}{2}, -1\frac{1}{6}$$



$$1\frac{3}{4}, -1\frac{11}{17}, -\frac{1}{2}, \frac{3}{4}, \frac{1}{4}, -\frac{1}{4}, 1\frac{1}{6}, -\frac{8}{9}$$



$$\frac{2}{3}, -\frac{1}{2}, \frac{1}{3}, -1\frac{3}{7}, 1\frac{8}{9}, -1\frac{2}{3}, -1\frac{1}{10}, -\frac{1}{4}$$

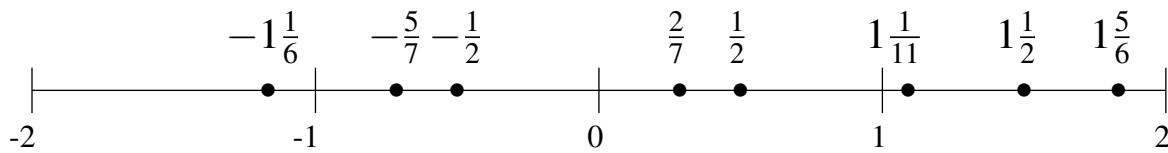


Ordering Fractions (H) Answers

Order each set of fractions using the number line.

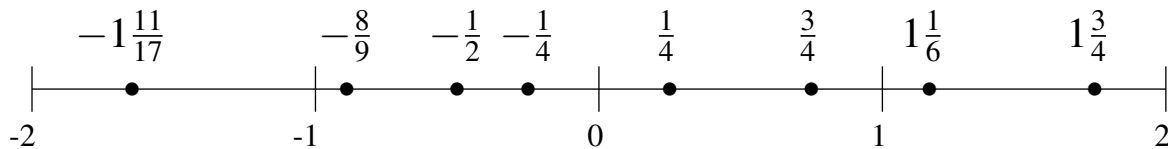
$$1\frac{5}{6}, \frac{2}{7}, 1\frac{1}{2}, 1\frac{1}{11}, \frac{1}{2}, -\frac{5}{7}, -\frac{1}{2}, -1\frac{1}{6}$$

$$-1\frac{1}{6}, -\frac{5}{7}, -\frac{1}{2}, \frac{2}{7}, \frac{1}{2}, 1\frac{1}{11}, 1\frac{1}{2}, 1\frac{5}{6}$$



$$1\frac{3}{4}, -1\frac{11}{17}, -\frac{1}{2}, \frac{3}{4}, \frac{1}{4}, -\frac{1}{4}, 1\frac{1}{6}, -\frac{8}{9}$$

$$-1\frac{11}{17}, -\frac{8}{9}, -\frac{1}{2}, -\frac{1}{4}, \frac{1}{4}, \frac{3}{4}, 1\frac{1}{6}, 1\frac{3}{4}$$



$$\frac{2}{3}, -\frac{1}{2}, \frac{1}{3}, -1\frac{3}{7}, 1\frac{8}{9}, -1\frac{2}{3}, -1\frac{1}{10}, -\frac{1}{4}$$

$$-1\frac{2}{3}, -1\frac{3}{7}, -1\frac{1}{10}, -\frac{1}{2}, -\frac{1}{4}, \frac{1}{3}, \frac{2}{3}, 1\frac{8}{9}$$

