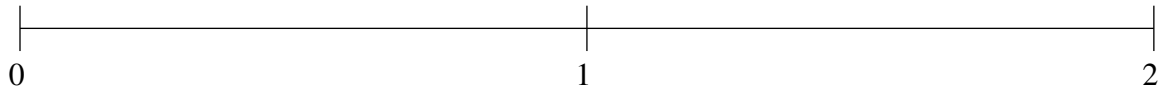


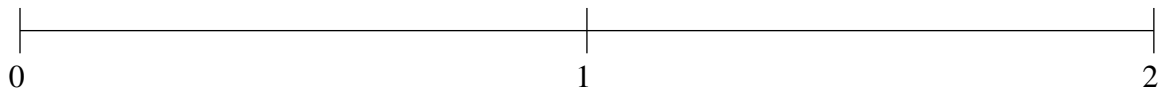
## Ordering Fractions (J)

Order each set of fractions using the number line.

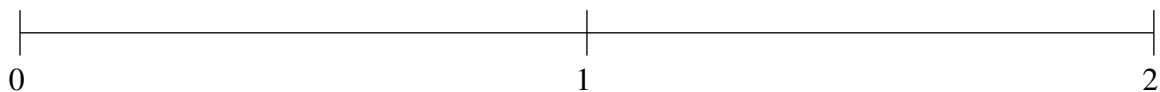
$$\frac{5}{6}, 1\frac{1}{2}, \frac{1}{10}, 1\frac{1}{5}, \frac{2}{5}$$



$$\frac{1}{6}, \frac{3}{4}, \frac{5}{12}, 1\frac{1}{4}, 1\frac{4}{5}$$



$$\frac{1}{2}, 1\frac{1}{5}, \frac{11}{12}, 1\frac{3}{4}, \frac{1}{5}$$

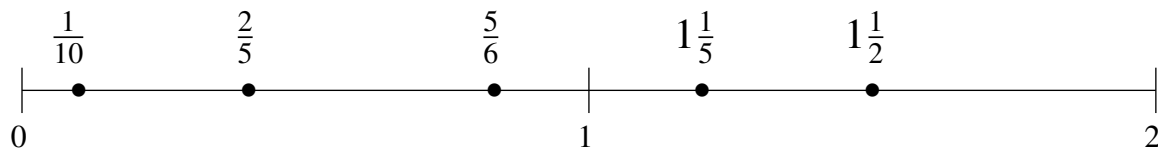


## Ordering Fractions (J) Answers

Order each set of fractions using the number line.

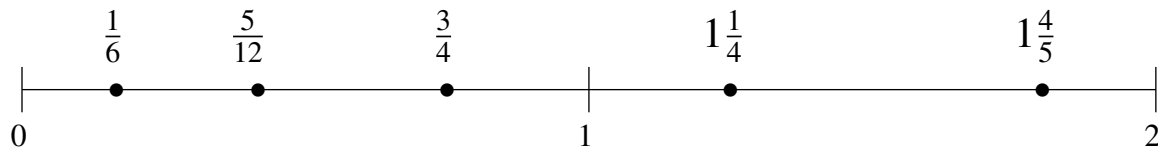
$$\frac{5}{6}, 1\frac{1}{2}, \frac{1}{10}, 1\frac{1}{5}, \frac{2}{5}$$

$$\frac{1}{10}, \frac{2}{5}, \frac{5}{6}, 1\frac{1}{5}, 1\frac{1}{2}$$



$$\frac{1}{6}, \frac{3}{4}, \frac{5}{12}, 1\frac{1}{4}, 1\frac{4}{5}$$

$$\frac{1}{6}, \frac{5}{12}, \frac{3}{4}, 1\frac{1}{4}, 1\frac{4}{5}$$



$$\frac{1}{2}, 1\frac{1}{5}, \frac{11}{12}, 1\frac{3}{4}, \frac{1}{5}$$

$$\frac{1}{5}, \frac{1}{2}, \frac{11}{12}, 1\frac{1}{5}, 1\frac{3}{4}$$

