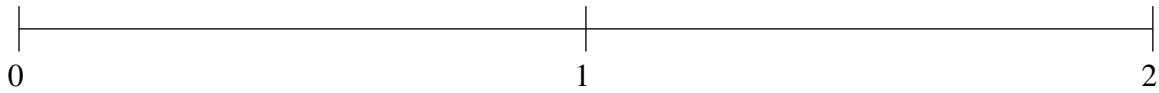


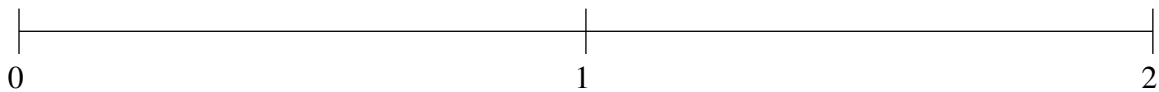
Ordering Fractions (D)

Order each set of fractions using the number line.

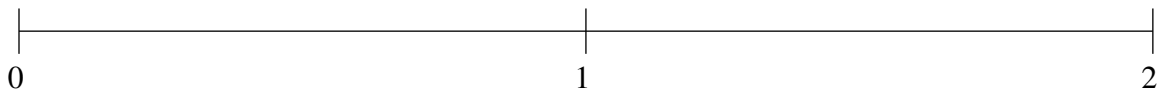
$$\frac{3}{4}, 1\frac{39}{40}, \frac{4}{29}, 1\frac{1}{2}, \frac{59}{62}$$



$$\frac{6}{41}, \frac{3}{4}, 1\frac{3}{4}, 1\frac{2}{7}, 1\frac{52}{99}$$



$$\frac{1}{5}, \frac{13}{15}, 1\frac{24}{43}, \frac{8}{13}, 1\frac{13}{15}$$

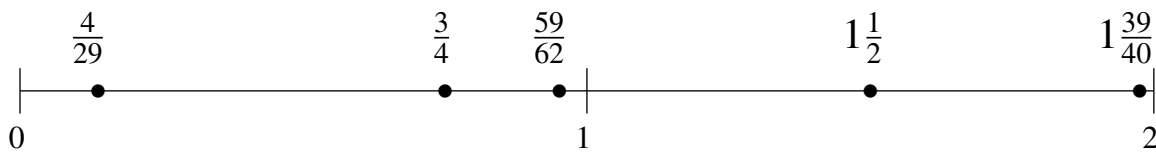


Ordering Fractions (D) Answers

Order each set of fractions using the number line.

$$\frac{3}{4}, 1\frac{39}{40}, \frac{4}{29}, 1\frac{1}{2}, \frac{59}{62}$$

$$\frac{4}{29}, \frac{3}{4}, \frac{59}{62}, 1\frac{1}{2}, 1\frac{39}{40}$$



$$\frac{6}{41}, \frac{3}{4}, 1\frac{3}{4}, 1\frac{2}{7}, 1\frac{52}{99}$$

$$\frac{6}{41}, \frac{3}{4}, 1\frac{2}{7}, 1\frac{52}{99}, 1\frac{3}{4}$$



$$\frac{1}{5}, \frac{13}{15}, 1\frac{24}{43}, \frac{8}{13}, 1\frac{13}{15}$$

$$\frac{1}{5}, \frac{8}{13}, \frac{13}{15}, 1\frac{24}{43}, 1\frac{13}{15}$$

