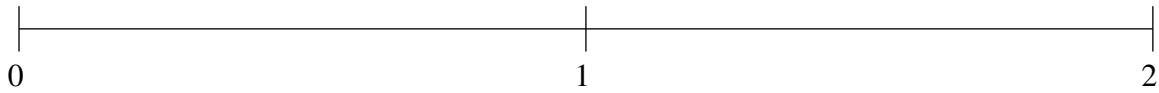


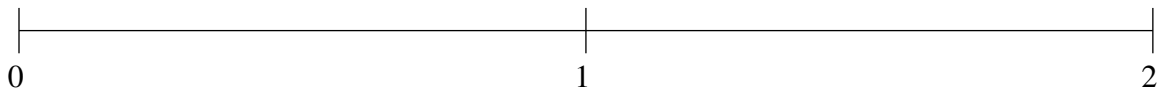
Ordering Fractions (E)

Order each set of fractions using the number line.

$$\frac{1}{2}, \frac{13}{59}, 1\frac{11}{57}, 1\frac{1}{2}, \frac{63}{67}$$



$$\frac{16}{43}, 1\frac{31}{72}, \frac{9}{61}, 1\frac{7}{47}, \frac{29}{31}$$



$$\frac{2}{3}, 1\frac{9}{17}, \frac{3}{17}, 1\frac{13}{16}, \frac{15}{16}$$

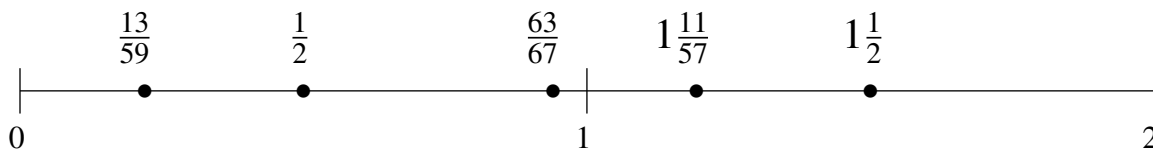


Ordering Fractions (E) Answers

Order each set of fractions using the number line.

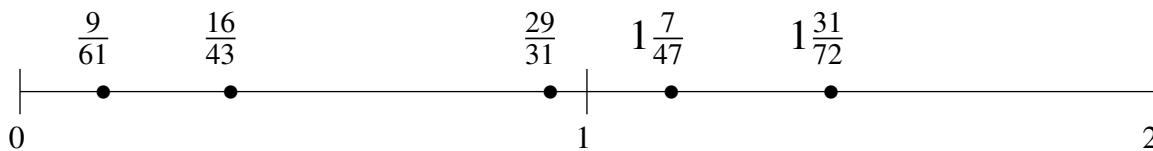
$$\frac{1}{2}, \frac{13}{59}, 1\frac{11}{57}, 1\frac{1}{2}, \frac{63}{67}$$

$$\frac{13}{59}, \frac{1}{2}, \frac{63}{67}, 1\frac{11}{57}, 1\frac{1}{2}$$



$$\frac{16}{43}, 1\frac{31}{72}, \frac{9}{61}, 1\frac{7}{47}, \frac{29}{31}$$

$$\frac{9}{61}, \frac{16}{43}, \frac{29}{31}, 1\frac{7}{47}, 1\frac{31}{72}$$



$$\frac{2}{3}, 1\frac{9}{17}, \frac{3}{17}, 1\frac{13}{16}, \frac{15}{16}$$

$$\frac{3}{17}, \frac{2}{3}, \frac{15}{16}, 1\frac{9}{17}, 1\frac{13}{16}$$

