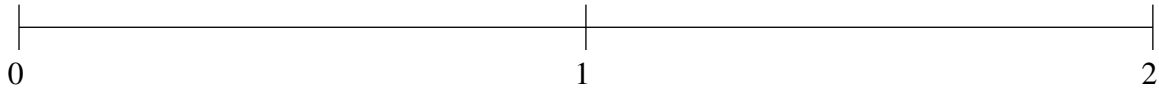


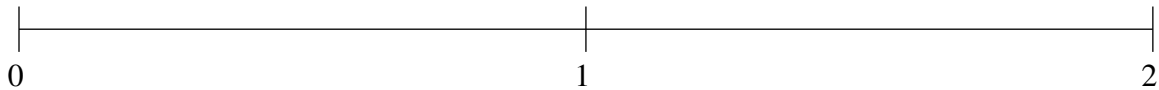
Ordering Fractions (B)

Order each set of fractions using the number line.

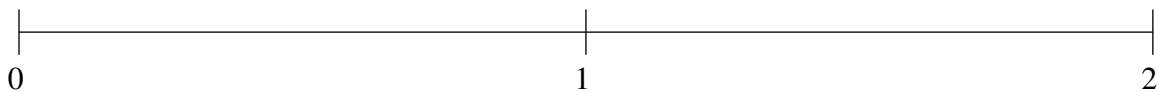
$$\frac{7}{10}, 1\frac{3}{4}, \frac{2}{5}, 1\frac{1}{4}, 1\frac{1}{2}$$



$$\frac{3}{4}, \frac{1}{4}, 1\frac{24}{25}, 1\frac{7}{20}, 1\frac{1}{10}$$



$$\frac{3}{4}, 1\frac{22}{25}, \frac{1}{5}, 1\frac{3}{5}, 1\frac{7}{100}$$

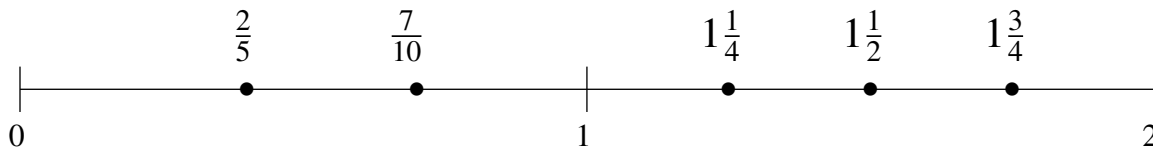


Ordering Fractions (B) Answers

Order each set of fractions using the number line.

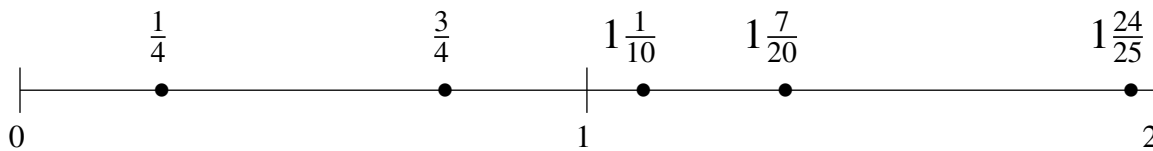
$$\frac{7}{10}, 1\frac{3}{4}, \frac{2}{5}, 1\frac{1}{4}, 1\frac{1}{2}$$

$$\frac{2}{5}, \frac{7}{10}, 1\frac{1}{4}, 1\frac{1}{2}, 1\frac{3}{4}$$



$$\frac{3}{4}, \frac{1}{4}, 1\frac{24}{25}, 1\frac{7}{20}, 1\frac{1}{10}$$

$$\frac{1}{4}, \frac{3}{4}, 1\frac{1}{10}, 1\frac{7}{20}, 1\frac{24}{25}$$



$$\frac{3}{4}, 1\frac{22}{25}, \frac{1}{5}, 1\frac{3}{5}, 1\frac{7}{100}$$

$$\frac{1}{5}, \frac{3}{4}, 1\frac{7}{100}, 1\frac{3}{5}, 1\frac{22}{25}$$

