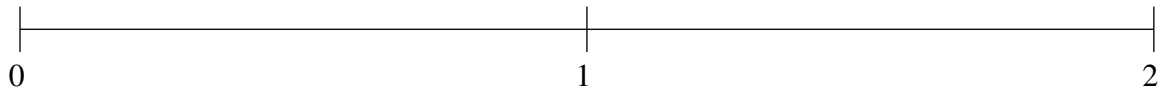


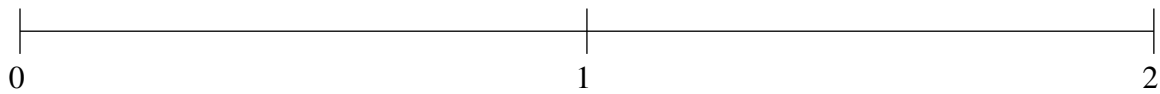
Ordering Fractions (C)

Order each set of fractions using the number line.

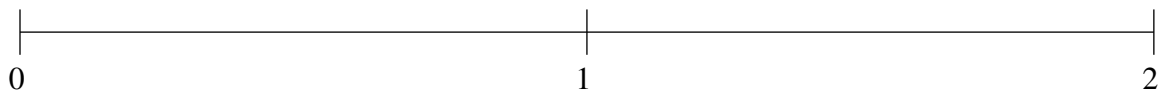
$$\frac{1}{2}, \frac{1}{4}, 1\frac{2}{5}, \frac{9}{10}, 1\frac{22}{25}$$



$$1\frac{2}{5}, \frac{1}{4}, 1\frac{4}{5}, \frac{3}{4}, \frac{1}{2}$$



$$\frac{4}{5}, 1\frac{1}{2}, \frac{1}{2}, 1\frac{1}{4}, \frac{1}{4}$$

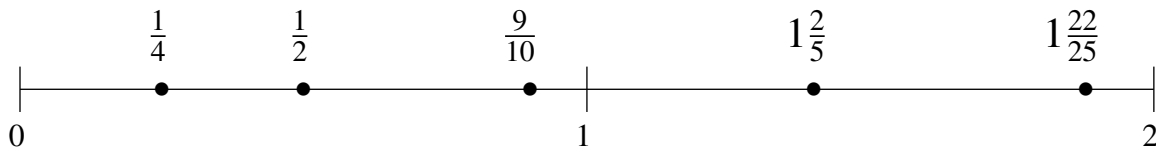


Ordering Fractions (C) Answers

Order each set of fractions using the number line.

$$\frac{1}{2}, \frac{1}{4}, 1\frac{2}{5}, \frac{9}{10}, 1\frac{22}{25}$$

$$\frac{1}{4}, \frac{1}{2}, \frac{9}{10}, 1\frac{2}{5}, 1\frac{22}{25}$$



$$1\frac{2}{5}, \frac{1}{4}, 1\frac{4}{5}, \frac{3}{4}, \frac{1}{2}$$

$$\frac{1}{4}, \frac{1}{2}, \frac{3}{4}, 1\frac{2}{5}, 1\frac{4}{5}$$



$$\frac{4}{5}, 1\frac{1}{2}, \frac{1}{2}, 1\frac{1}{4}, \frac{1}{4}$$

$$\frac{1}{4}, \frac{1}{2}, \frac{4}{5}, 1\frac{1}{4}, 1\frac{1}{2}$$

