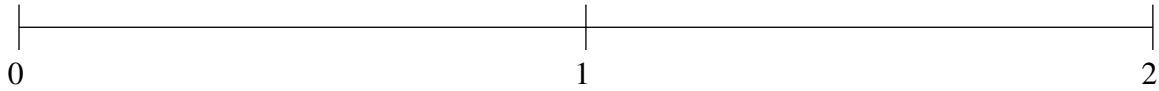


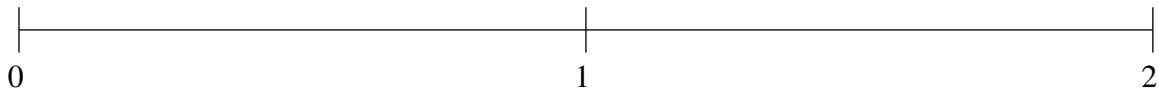
Ordering Fractions (D)

Order each set of fractions using the number line.

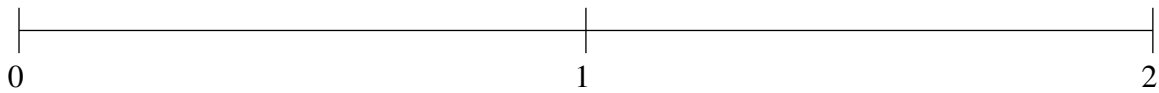
$$1\frac{1}{2}, 1\frac{1}{4}, 1\frac{3}{4}, \frac{1}{2}, \frac{1}{5}$$



$$\frac{4}{5}, 1\frac{23}{25}, \frac{1}{2}, 1\frac{1}{2}, \frac{6}{25}$$



$$\frac{1}{10}, \frac{1}{2}, 1\frac{3}{4}, 1\frac{1}{2}, 1\frac{3}{20}$$

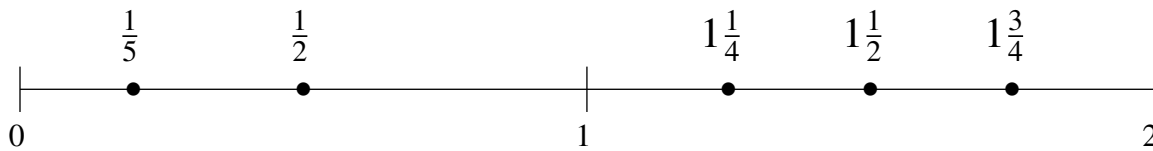


Ordering Fractions (D) Answers

Order each set of fractions using the number line.

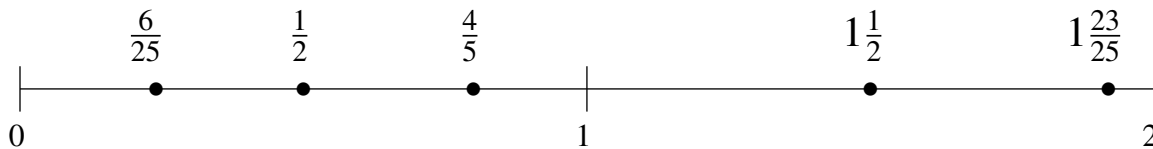
$$1\frac{1}{2}, 1\frac{1}{4}, 1\frac{3}{4}, \frac{1}{2}, \frac{1}{5}$$

$$\frac{1}{5}, \frac{1}{2}, 1\frac{1}{4}, 1\frac{1}{2}, 1\frac{3}{4}$$



$$\frac{4}{5}, 1\frac{23}{25}, \frac{1}{2}, 1\frac{1}{2}, \frac{6}{25}$$

$$\frac{6}{25}, \frac{1}{2}, \frac{4}{5}, 1\frac{1}{2}, 1\frac{23}{25}$$



$$\frac{1}{10}, \frac{1}{2}, 1\frac{3}{4}, 1\frac{1}{2}, 1\frac{3}{20}$$

$$\frac{1}{10}, \frac{1}{2}, 1\frac{3}{20}, 1\frac{1}{2}, 1\frac{3}{4}$$

