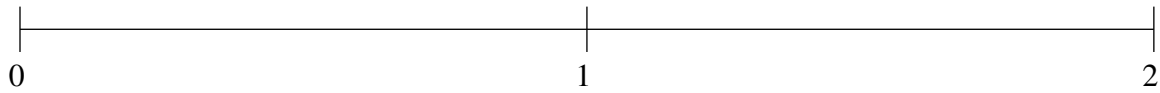


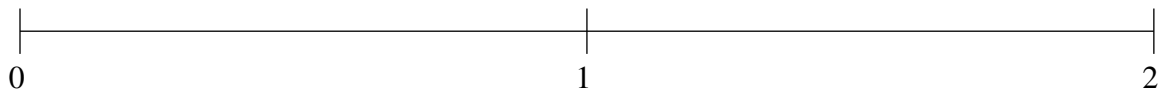
## Ordering Fractions (E)

Order each set of fractions using the number line.

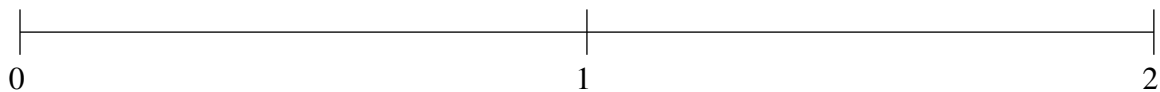
$$1\frac{3}{20}, \frac{1}{4}, \frac{3}{4}, 1\frac{3}{5}, \frac{1}{2}$$



$$\frac{1}{2}, \frac{1}{4}, 1\frac{7}{10}, 1\frac{1}{4}, \frac{9}{10}$$



$$\frac{1}{2}, \frac{3}{4}, 1\frac{3}{4}, 1\frac{1}{2}, \frac{1}{5}$$

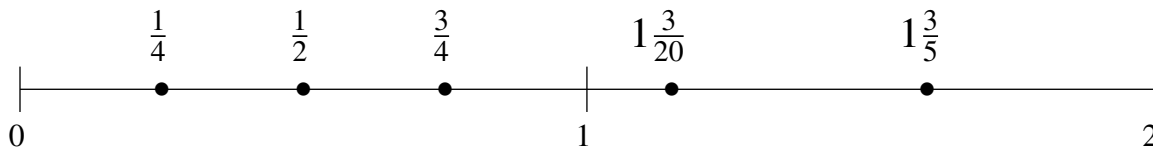


## Ordering Fractions (E) Answers

Order each set of fractions using the number line.

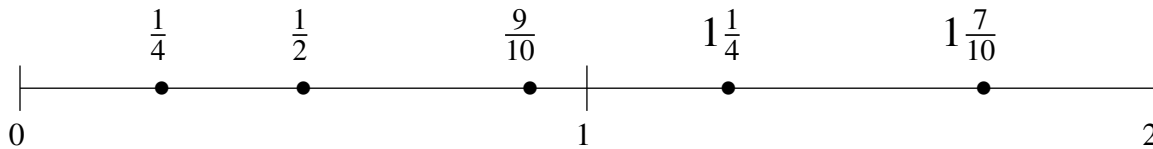
$$1\frac{3}{20}, \frac{1}{4}, \frac{3}{4}, 1\frac{3}{5}, \frac{1}{2}$$

$$\frac{1}{4}, \frac{1}{2}, \frac{3}{4}, 1\frac{3}{20}, 1\frac{3}{5}$$



$$\frac{1}{2}, \frac{1}{4}, 1\frac{7}{10}, 1\frac{1}{4}, \frac{9}{10}$$

$$\frac{1}{4}, \frac{1}{2}, \frac{9}{10}, 1\frac{1}{4}, 1\frac{7}{10}$$



$$\frac{1}{2}, \frac{3}{4}, 1\frac{3}{4}, 1\frac{1}{2}, \frac{1}{5}$$

$$\frac{1}{5}, \frac{1}{2}, \frac{3}{4}, 1\frac{1}{2}, 1\frac{3}{4}$$

