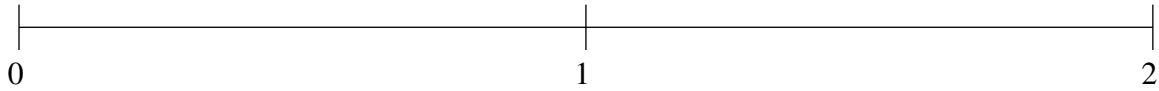


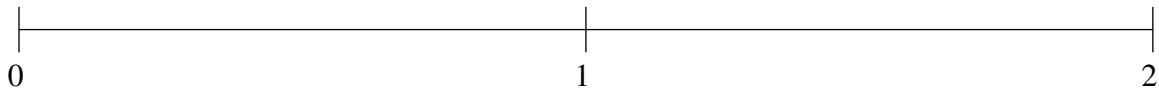
## Ordering Fractions (G)

Order each set of fractions using the number line.

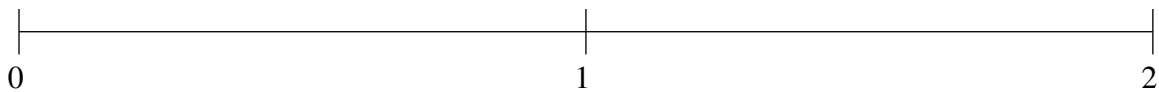
$$\frac{1}{2}, 1\frac{17}{20}, 1\frac{1}{4}, \frac{1}{4}, \frac{4}{5}$$



$$1\frac{2}{5}, \frac{1}{10}, \frac{3}{4}, \frac{1}{2}, 1\frac{3}{4}$$



$$\frac{1}{2}, \frac{3}{4}, \frac{1}{4}, 1\frac{3}{4}, 1\frac{1}{2}$$

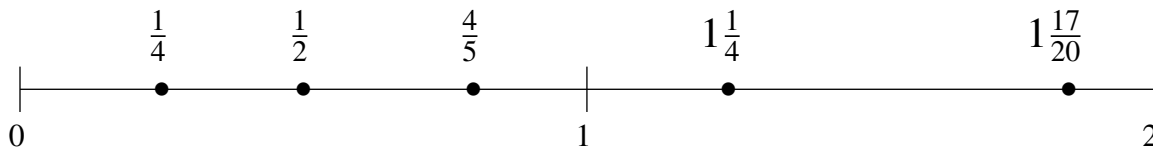


## Ordering Fractions (G) Answers

Order each set of fractions using the number line.

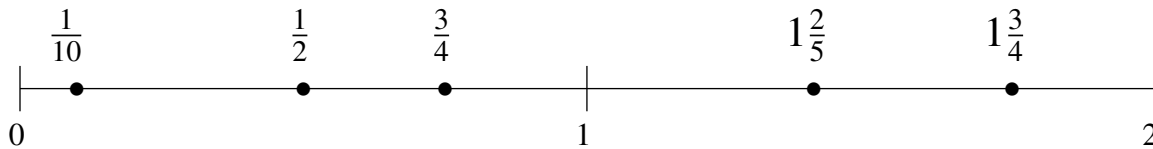
$$\frac{1}{2}, 1\frac{17}{20}, 1\frac{1}{4}, \frac{1}{4}, \frac{4}{5}$$

$$\frac{1}{4}, \frac{1}{2}, \frac{4}{5}, 1\frac{1}{4}, 1\frac{17}{20}$$



$$1\frac{2}{5}, \frac{1}{10}, \frac{3}{4}, \frac{1}{2}, 1\frac{3}{4}$$

$$\frac{1}{10}, \frac{1}{2}, \frac{3}{4}, 1\frac{2}{5}, 1\frac{3}{4}$$



$$\frac{1}{2}, \frac{3}{4}, \frac{1}{4}, 1\frac{3}{4}, 1\frac{1}{2}$$

$$\frac{1}{4}, \frac{1}{2}, \frac{3}{4}, 1\frac{1}{2}, 1\frac{3}{4}$$

