




# Parts of a Group (A)



In this group there  
are 5 shapes and  
2 are filled in.

$$\frac{2 \text{ shapes filled in}}{5 \text{ shapes in group}} = \frac{2}{5}$$

Write a fraction for each of the following models.



# Parts of a Group (A) Answers



In this group there  
are 5 shapes and  
2 are filled in.

$$\frac{2 \text{ shapes filled in}}{5 \text{ shapes in group}} = \frac{2}{5}$$

Write a fraction for each of the following models.

$$\frac{3}{4}$$

$$\frac{5}{6}$$

$$\frac{1}{5}$$

$$\frac{1}{4}$$

$$\frac{4}{5}$$

$$\frac{2}{3}$$

$$\frac{1}{8}$$

$$\frac{3}{8}$$