


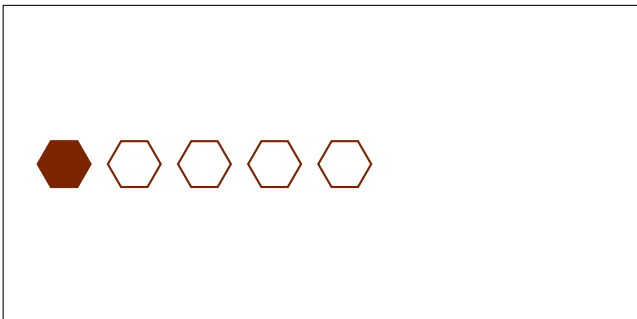


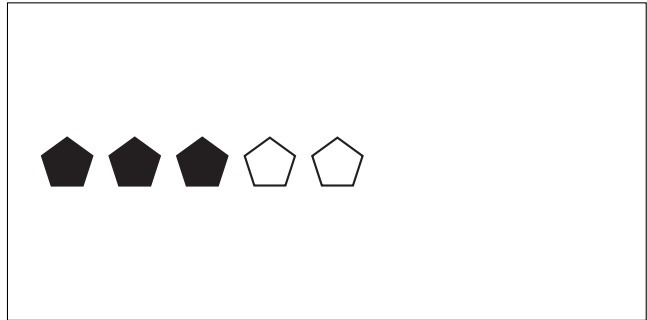
Parts of a Group (H)



In this group there
are 3 shapes and
2 are filled in.

$$\frac{2 \text{ shapes filled in}}{3 \text{ shapes in group}} = \frac{2}{3}$$

Write a fraction for each of the following models.



Parts of a Group (H) Answers



In this group there
are 3 shapes and
2 are filled in.

$$\frac{2 \text{ shapes filled in}}{3 \text{ shapes in group}} = \frac{2}{3}$$

Write a fraction for each of the following models.

