


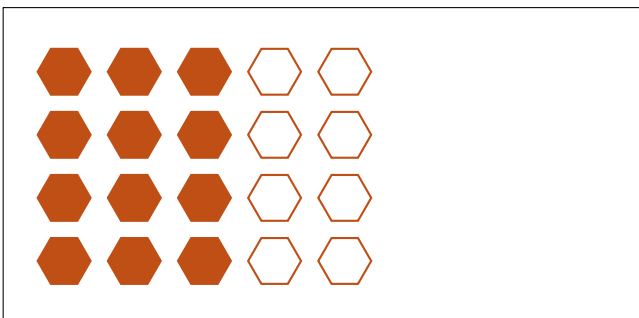
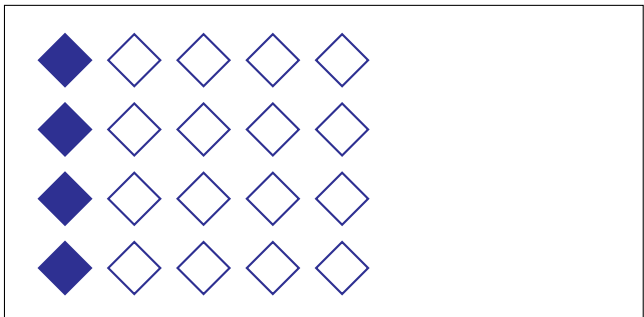
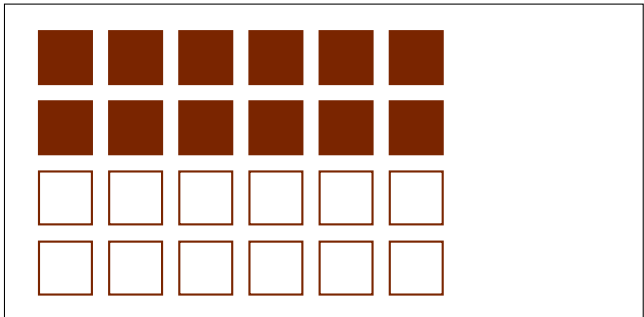

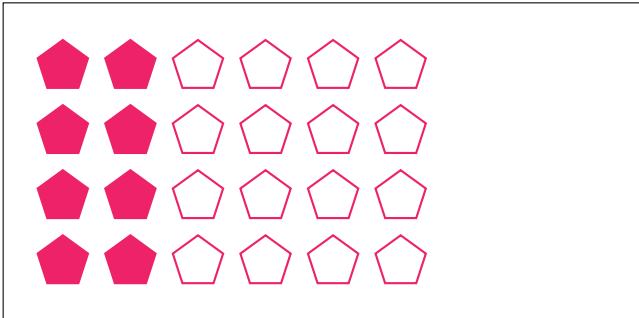
Parts of a Group (E)



In this group there are 4 shapes and 2 are filled in.

$$\frac{2 \text{ shapes filled in}}{4 \text{ shapes in group}} = \frac{2}{4} = \frac{1}{2}$$

Write a fraction for each of the following models.



Parts of a Group (E) Answers



In this group there are 4 shapes and 2 are filled in.

$$\frac{2 \text{ shapes filled in}}{4 \text{ shapes in group}} = \frac{2}{4} = \frac{1}{2}$$

Write a fraction for each of the following models.

$$\frac{8}{24} = \frac{1}{3}$$

$$\frac{10}{15} = \frac{2}{3}$$

$$\frac{2}{5}$$

$$\frac{12}{24} = \frac{1}{2}$$

$$\frac{8}{10} = \frac{4}{5}$$

$$\frac{4}{20} = \frac{1}{5}$$

$$\frac{12}{20} = \frac{3}{5}$$

$$\frac{6}{8} = \frac{3}{4}$$