


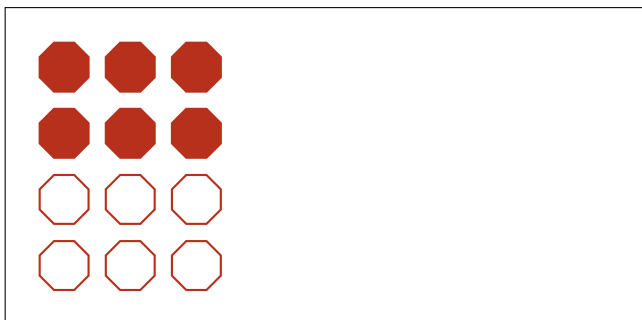
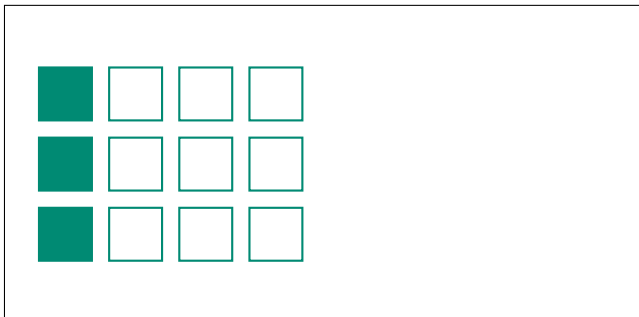
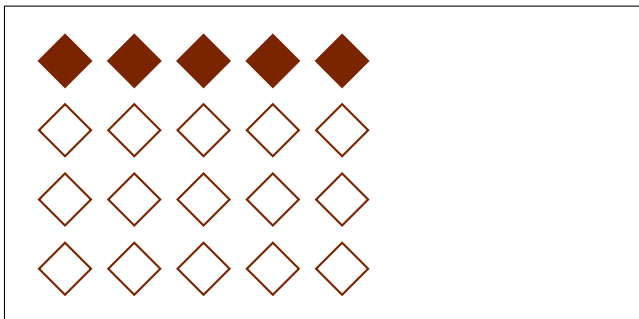

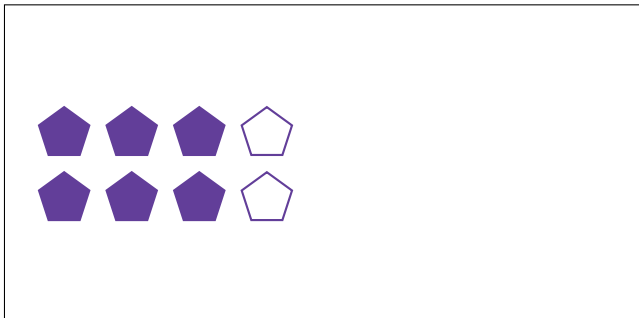
Parts of a Group (C)




In this group there are 18 shapes and 9 are filled in.

$$\frac{9 \text{ shapes filled in}}{18 \text{ shapes in group}} = \frac{9}{18} = \frac{1}{2}$$

Write a fraction for each of the following models.




Parts of a Group (C) Answers




In this group there are 18 shapes and 9 are filled in.

$$\frac{9 \text{ shapes filled in}}{18 \text{ shapes in group}} = \frac{9}{18} = \frac{1}{2}$$


Write a fraction for each of the following models.




$$\frac{8}{16} = \frac{1}{2}$$



$$\frac{6}{8} = \frac{3}{4}$$




$$\frac{10}{15} = \frac{2}{3}$$




$$\frac{5}{20} = \frac{1}{4}$$



$$\frac{1}{3}$$



$$\frac{3}{12} = \frac{1}{4}$$



$$\frac{6}{12} = \frac{1}{2}$$



$$\frac{3}{4}$$