



Autumn Ratios (B)

Find each ratio and simplify, if necessary.




$$\text{Large Oak Leaf} : (\text{Large Oak Leaf} + \text{Small Maple Leaf}) = \quad : \quad = \quad :$$

$$\text{Small Maple Leaf} : (\text{Small Maple Leaf} + \text{Large Oak Leaf}) = \quad : \quad = \quad :$$



$$\text{Large Oak Leaf} : \text{Small Maple Leaf} = \quad : \quad = \quad :$$

$$\text{Small Maple Leaf} : \text{Large Oak Leaf} = \quad : \quad = \quad :$$



$$\text{Small Maple Leaf} : (\text{Small Maple Leaf} + \text{Large Oak Leaf}) = \quad : \quad = \quad :$$

$$\text{Large Oak Leaf} : (\text{Large Oak Leaf} + \text{Small Maple Leaf}) = \quad : \quad = \quad :$$



$$\text{Green Leaf Sprig} : \text{Large Oak Leaf} = \quad : \quad = \quad :$$

$$\text{Large Oak Leaf} : \text{Green Leaf Sprig} = \quad : \quad = \quad :$$