



Autumn Ratios (F)

Find each ratio and simplify, if necessary.



$$\text{Yellow Leaf} : (\text{Yellow Leaf} + \text{Brown Leaf}) = \quad : \quad = \quad :$$

$$\text{Brown Leaf} : (\text{Brown Leaf} + \text{Yellow Leaf}) = \quad : \quad = \quad :$$




$$\text{Orange Leaf} : (\text{Orange Leaf} + \text{Brown Leaf}) = \quad : \quad = \quad :$$

$$\text{Brown Leaf} : (\text{Brown Leaf} + \text{Orange Leaf}) = \quad : \quad = \quad :$$



$$\text{Yellow Leaf} : \text{Brown Leaf} = \quad : \quad = \quad :$$

$$\text{Brown Leaf} : \text{Yellow Leaf} = \quad : \quad = \quad :$$



$$\text{Yellow Leaf} : (\text{Yellow Leaf} + \text{Orange Leaf}) = \quad : \quad = \quad :$$

$$\text{Orange Leaf} : (\text{Orange Leaf} + \text{Yellow Leaf}) = \quad : \quad = \quad :$$