


Autumn Ratios (I)


Find each ratio and simplify, if necessary.




$$\begin{aligned} \text{Tree} : \text{Leaf} &= \quad : \quad = \quad : \quad \\ \text{Leaf} : \text{Tree} &= \quad : \quad = \quad : \quad \end{aligned}$$



$$\begin{aligned} \text{Leaf} : \text{Tree} &= \quad : \quad = \quad : \quad \\ \text{Tree} : \text{Leaf} &= \quad : \quad = \quad : \quad \end{aligned}$$




$$\begin{aligned} \text{Leaf} : \text{Tree} &= \quad : \quad = \quad : \quad \\ \text{Tree} : \text{Leaf} &= \quad : \quad = \quad : \quad \end{aligned}$$



$$\begin{aligned} \text{Tree} : \text{Leaf} &= \quad : \quad = \quad : \quad \\ \text{Leaf} : \text{Tree} &= \quad : \quad = \quad : \quad \end{aligned}$$

Autumn Ratios (I) Answers

Find each ratio and simplify, if necessary.



$$\text{tree} : \text{leaf} = 4 : 7 = 4 : 7$$

$$\text{leaf} : \text{tree} = 7 : 4 = 7 : 4$$




$$\text{leaf} : \text{tree} = 2 : 5 = 2 : 5$$

$$\text{tree} : \text{leaf} = 5 : 2 = 5 : 2$$



$$\text{leaf} : \text{tree} = 8 : 2 = 4 : 1$$

$$\text{tree} : \text{leaf} = 2 : 8 = 1 : 4$$



$$\text{tree} : \text{leaf} = 6 : 6 = 1 : 1$$

$$\text{leaf} : \text{tree} = 6 : 6 = 1 : 1$$