


Autumn Ratios (A)


Find each ratio and simplify, if necessary.




$$\begin{array}{ccccccc}
 \text{leaf} & : & \text{tree} & = & & : & = & : \\
 \text{tree} & : & \text{leaf} & = & & : & = & :
 \end{array}$$



$$\begin{array}{ccccccc}
 \text{tree} & : & \text{leaf} & = & & : & = & : \\
 \text{leaf} & : & \text{tree} & = & & : & = & :
 \end{array}$$



$$\begin{array}{ccccccc}
 \text{tree} & : & \text{leaf} & = & & : & = & : \\
 \text{leaf} & : & \text{tree} & = & & : & = & :
 \end{array}$$



$$\begin{array}{ccccccc}
 \text{tree} & : & \text{leaf} & = & & : & = & : \\
 \text{leaf} & : & \text{tree} & = & & : & = & :
 \end{array}$$