


Autumn Ratios (C)


Find each ratio and simplify, if necessary.




$$\begin{array}{l} \text{Oak leaf} : \text{Maple leaf} = \quad : \quad = \quad : \quad \\ \text{Maple leaf} : \text{Oak leaf} = \quad : \quad = \quad : \quad \end{array}$$



$$\begin{array}{l} \text{Maple leaf} : \text{Oak leaf} = \quad : \quad = \quad : \quad \\ \text{Oak leaf} : \text{Maple leaf} = \quad : \quad = \quad : \quad \end{array}$$



$$\begin{array}{l} \text{Maple leaf} : \text{Oak leaf} = \quad : \quad = \quad : \quad \\ \text{Oak leaf} : \text{Maple leaf} = \quad : \quad = \quad : \quad \end{array}$$



$$\begin{array}{l} \text{Tree} : \text{Oak leaf} = \quad : \quad = \quad : \quad \\ \text{Oak leaf} : \text{Tree} = \quad : \quad = \quad : \quad \end{array}$$