



Autumn Ratios (D)


Find each ratio and simplify, if necessary.




$$\begin{aligned} \text{Maple leaf} : \text{Oak leaf} &= \quad : \quad = \quad : \\ \text{Oak leaf} : \text{Maple leaf} &= \quad : \quad = \quad : \end{aligned}$$



$$\begin{aligned} \text{Tree} : \text{Oak leaf} &= \quad : \quad = \quad : \\ \text{Oak leaf} : \text{Tree} &= \quad : \quad = \quad : \end{aligned}$$




$$\begin{aligned} \text{Tree} : \text{Oak leaf} &= \quad : \quad = \quad : \\ \text{Oak leaf} : \text{Tree} &= \quad : \quad = \quad : \end{aligned}$$



$$\begin{aligned} \text{Oak leaf} : \text{Maple leaf} &= \quad : \quad = \quad : \\ \text{Maple leaf} : \text{Oak leaf} &= \quad : \quad = \quad : \end{aligned}$$


Autumn Ratios (D) Answers

Find each ratio and simplify, if necessary.




$$\text{maple leaf} : \text{oak leaf} = 3 : 4 = 3 : 4$$

$$\text{oak leaf} : \text{maple leaf} = 4 : 3 = 4 : 3$$




$$\text{tree} : \text{oak leaf} = 6 : 8 = 3 : 4$$

$$\text{oak leaf} : \text{tree} = 8 : 6 = 4 : 3$$



$$\text{tree} : \text{oak leaf} = 1 : 8 = 1 : 8$$

$$\text{oak leaf} : \text{tree} = 8 : 1 = 8 : 1$$



$$\text{oak leaf} : \text{maple leaf} = 2 : 9 = 2 : 9$$

$$\text{maple leaf} : \text{oak leaf} = 9 : 2 = 9 : 2$$