



Autumn Ratios (D)


Find each ratio and simplify, if necessary.




$$\begin{aligned} \text{Maple leaf} : \text{Oak leaf} &= \quad : \quad = \quad : \\ \text{Oak leaf} : \text{Maple leaf} &= \quad : \quad = \quad : \end{aligned}$$



$$\begin{aligned} \text{Tree} : \text{Oak leaf} &= \quad : \quad = \quad : \\ \text{Oak leaf} : \text{Tree} &= \quad : \quad = \quad : \end{aligned}$$



$$\begin{aligned} \text{Tree} : \text{Oak leaf} &= \quad : \quad = \quad : \\ \text{Oak leaf} : \text{Tree} &= \quad : \quad = \quad : \end{aligned}$$



$$\begin{aligned} \text{Oak leaf} : \text{Maple leaf} &= \quad : \quad = \quad : \\ \text{Maple leaf} : \text{Oak leaf} &= \quad : \quad = \quad : \end{aligned}$$